

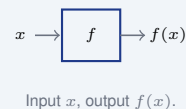
Function Notation

Name: _____	Date: _____	Score: _____ / 18
-------------	-------------	-------------------

Quick Review and Helpful Hints

$f(x)$ means “the value of the function f at x .” To *evaluate*, substitute the given number everywhere you see x and simplify. To *solve* $f(x) = k$, set the rule equal to k and solve for x . The letter (like f, g, h) is just a name.

▶ **Example:** Given $f(x) = 4x - 9$, find $f(5)$. **Work:** Substitute 5 for x : $f(5) = 4(5) - 9 = 20 - 9$.
 ★ **Answer:** 11



◆ Practice Problems

Evaluate or solve as directed.

- | | |
|---|--|
| <p>1. $f(x) = 4x - 9$; $f(5) =$ _____</p> <p>2. $g(x) = x^2 + 2$; $g(-3) =$ _____</p> <p>3. $h(x) = -2x + 7$; $h(0) =$ _____</p> <p>4. $f(x) = 3x^2 - x$; $f(2) =$ _____</p> <p>5. $p(x) = \frac{x+6}{2}$; $p(8) =$ _____</p> <p>6. $g(x) = 7 - 3x$; $g(-4) =$ _____</p> <p>7. $f(x) = 2x + 5$; $f(x) = 17$, $x =$ _____</p> | <p>8. $g(x) = x^2 - 1$; $g(x) = 24$, $x =$ _____</p> <p>9. $h(x) = -x + 10$; $h(x) = 3$, $x =$ _____</p> <p>10. $f(x) = 6x$; $f(x) = 42$, $x =$ _____</p> <p>11. $f(x) = x^2 + 3x$; $f(-2) =$ _____</p> <p>12. $g(x) = x - 4$; $g(1) =$ _____</p> <p>13. $f(x) = 5x + 1$; $f(3) =$ _____</p> <p>14. $f(x) = 2x - 3$; $f(x) = 9$, $x =$ _____</p> |
|---|--|

◆ Word Problems

15. A function gives cost $C(x) = 3x + 5$ for x items. Find $C(4)$. _____
16. $f(x) = 2x + 1$ models a pattern. For what x is $f(x) = 15$? _____
17. A ball's height is $h(t) = 20 - 5t$ meters after t seconds. Find $h(2)$. _____
18. Given $g(x) = x^2$, find $g(6)$. _____



Answer Keys

- | | | |
|------------------------------------|--|-------------------------------------|
| 1. <input type="text" value="11"/> | 7. <input type="text" value="6"/> | 13. <input type="text" value="16"/> |
| 2. <input type="text" value="11"/> | 8. <input type="text" value="x = ±5"/> | 14. <input type="text" value="6"/> |
| 3. <input type="text" value="7"/> | 9. <input type="text" value="7"/> | 15. <input type="text" value="17"/> |
| 4. <input type="text" value="10"/> | 10. <input type="text" value="7"/> | 16. <input type="text" value="7"/> |
| 5. <input type="text" value="7"/> | 11. <input type="text" value="-2"/> | 17. <input type="text" value="10"/> |
| 6. <input type="text" value="19"/> | 12. <input type="text" value="3"/> | 18. <input type="text" value="36"/> |

Step-by-Step Explanations

1. Start by naming the process: Read what the problem is asking, choose the matching rule, write the setup, and then simplify one step at a time. The setup/work is Substitute 5: $4(5) - 9 = 20 - 9 = 11$. So the final answer is 11.

2. A good way to think about this is: Read what the problem is asking, choose the matching rule, write the setup, and then simplify one step at a time. The setup/work is Substitute -3 : $(-3)^2 + 2 = 9 + 2 = 11$. So the final answer is 11.

3. Step by step: Read what the problem is asking, choose the matching rule, write the setup, and then simplify one step at a time. The setup/work is Substitute 0: $-2(0) + 7 = 7$. So the final answer is 7.

4. Take it one move at a time: Read what the problem is asking, choose the matching rule, write the setup, and then simplify one step at a time. The setup/work is Substitute 2: $3(2)^2 - 2 = 3(4) - 2 = 12 - 2 = 10$. So the final answer is 10.

5. Start by naming the process: Read what the problem is asking, choose the matching rule, write the setup, and then simplify one step at a time. The setup/work is Substitute 8: $\frac{8+6}{2} = \frac{14}{2} = 7$. So the final answer is 7.

6. A good way to think about this is: Read what the problem is asking, choose the matching rule, write the setup, and then simplify one step at a time. The setup/work is Substitute -4 : $7 - 3(-4) = 7 + 12 = 19$. So the final answer is 19.

7. Step by step: Read what the problem is asking, choose the matching rule, write the setup, and then simplify one step at a time. The setup/work is Set $2x + 5 = 17$. Subtract 5: $2x = 12$, so $x = 6$. So the final answer is 6.

8. Take it one move at a time: Read what the problem is asking, choose the matching rule, write the setup, and then simplify one step at a time. The setup/work is Set $x^2 - 1 = 24$, so $x^2 = 25$ and $x = \pm 5$. So the final answer is $x = \pm 5$.

9. Start by naming the process: Read what the problem is asking, choose the matching rule, write the setup, and then simplify one step at a time. The setup/work is Set $-x + 10 = 3$. Then $-x = -7$, so $x = 7$. So the final answer is 7.

10. A good way to think about this is: Read what the problem is asking, choose the matching rule, write the setup, and then simplify one step at a time. The setup/work is Set $6x = 42$. Divide by 6: $x = 7$. So the final answer is 7.

11. Step by step: Read what the problem is asking, choose the matching rule, write the setup, and then simplify one step at a time. The setup/work is Substitute -2 : $(-2)^2 + 3(-2) = 4 - 6 = -2$. So the final answer is -2 .

12. Take it one move at a time: Read what the problem is asking, choose the matching rule, write the setup, and then simplify one step at a time. The setup/work is Substitute 1: $|1 - 4| = |-3| = 3$. So the final answer is 3.

13. Start by naming the process: Read what the problem is asking, choose the matching rule, write the setup, and then simplify one step at a time. The setup/work is Substitute 3: $5(3) + 1 = 15 + 1 = 16$. So the final answer is 16.

14. A good way to think about this is: Read what the problem is asking, choose the matching rule, write the setup, and then simplify one step at a time. The setup/work is Set $2x - 3 = 9$. Add 3: $2x = 12$, so $x = 6$. So the final answer is 6.

15. Step by step: Read what the problem is asking, choose the matching rule, write the setup, and then simplify one step at a time. The setup/work is Substitute 4: $C(4) = 3(4) + 5 = 12 + 5 = 17$. So the final answer is 17.

16. Take it one move at a time: Read what the problem is asking, choose the matching rule, write the setup, and then simplify one step at a time. The setup/work is Set $2x + 1 = 15$. Subtract 1: $2x = 14$, so $x = 7$. So the final answer is 7.

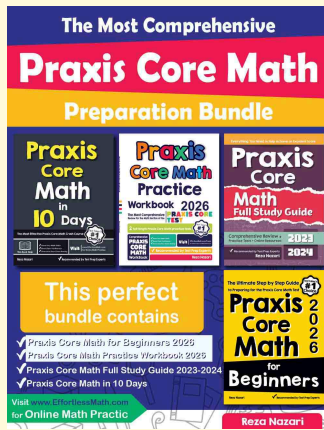
17. Start by naming the process: Read what the problem is asking, choose the matching rule, write the setup, and then simplify one step at a time. The setup/work is Substitute 2: $20 - 5(2) = 20 - 10 = 10$ meters. So the final answer is 10.

18. A good way to think about this is: Read what the problem is asking, choose the matching rule, write the setup, and then simplify one step at a time. The setup/work is Substitute 6: $6^2 = 36$. So the final answer is 36.



Keep Building Praxis Core Math Skills

Recommended Effortless Math resources



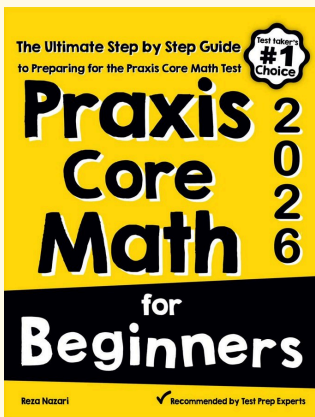
The Most Comprehensive Praxis Core Math Preparation Bundle

Use the complete Praxis Core Math resource for review, worked examples, extra practice, and test-style questions after each worksheet.



Scan Me
Download Instantly

STUDENT FAVORITE - Praxis Core Math for Beginners



Praxis Core Math for Beginners 2026

Step-by-step lessons, topic practice, and full review support for students who want a calm path through Praxis Core Math preparation.

A strong companion for self-study, tutoring, homework, and targeted review.

PDF Edition



Scan Me
Download Instantly

For more Praxis Core Math prep, visit [EffortlessMath.com/Praxis-Core](https://www.EffortlessMath.com/Praxis-Core)