

Relations and Functions

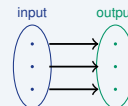
Name: _____ Date: _____ Score: _____ / 18

Quick Review and Helpful Hints

A *relation* is any set of ordered pairs. A *function* is a special relation where every input (x) has *exactly one* output (y). To check: make sure no x -value is paired with two different y -values. On a graph, use the *vertical line test* – a vertical line may touch the graph only once.

▶ **Example:** Is $\{(1, 2), (2, 4), (3, 6)\}$ a function? **Work:** Each input 1, 2, 3 appears just once, so each has only one output.

★ **Answer:** Yes



Each input → exactly one output.

◆ Practice Problems

Tell whether each relation is a function (Yes/No).

- | | |
|--|---|
| <p>1. $\{(1, 2), (2, 3), (3, 4)\}$ _____</p> <p>2. $\{(1, 2), (1, 3), (2, 4)\}$ _____</p> <p>3. $\{(0, 5), (1, 5), (2, 5)\}$ _____</p> <p>4. $\{(4, 1), (4, 2), (5, 3)\}$ _____</p> <p>5. $\{(-1, 0), (0, 1), (1, 2)\}$ _____</p> <p>6. $\{(2, 2), (3, 3), (2, 4)\}$ _____</p> <p>7. $\{(7, 1), (8, 1), (9, 1)\}$ _____</p> | <p>8. $\{(1, 1), (2, 2), (3, 3), (1, 4)\}$ _____</p> <p>9. Inputs 1, 2, 3, 4 each with one y _____</p> <p>10. A vertical line hits the graph twice _____</p> <p>11. $\{(5, 10), (6, 12), (7, 14)\}$ _____</p> <p>12. $\{(0, 0), (0, 1)\}$ _____</p> <p>13. $\{(-2, 3), (-1, 3), (0, 3)\}$ _____</p> <p>14. $\{(1, 5), (2, 6), (3, 7), (2, 8)\}$ _____</p> |
|--|---|

◆ Word Problems

15. A machine gives each input exactly one output. Is it a function? _____
16. Is the relation “person → their birth month” a function? _____
17. Is “ x → its square roots” a function (for example $4 \rightarrow 2$ and -2)? _____
18. Is $\{(1, 2), (2, 4), (3, 6), (4, 8)\}$ a function? _____



Answer Keys

- | | | |
|---------------------------------|----------------------------------|----------------------------------|
| 1. <input type="checkbox"/> Yes | 7. <input type="checkbox"/> Yes | 13. <input type="checkbox"/> Yes |
| 2. <input type="checkbox"/> No | 8. <input type="checkbox"/> No | 14. <input type="checkbox"/> No |
| 3. <input type="checkbox"/> Yes | 9. <input type="checkbox"/> Yes | 15. <input type="checkbox"/> Yes |
| 4. <input type="checkbox"/> No | 10. <input type="checkbox"/> No | 16. <input type="checkbox"/> Yes |
| 5. <input type="checkbox"/> Yes | 11. <input type="checkbox"/> Yes | 17. <input type="checkbox"/> No |
| 6. <input type="checkbox"/> No | 12. <input type="checkbox"/> No | 18. <input type="checkbox"/> Yes |

Step-by-Step Explanations

1. Start by naming the process: Read what the problem is asking, choose the matching rule, write the setup, and then simplify one step at a time. The setup/work is Each x (1, 2, 3) appears once: yes. So the final answer is Yes.

2. A good way to think about this is: Read what the problem is asking, choose the matching rule, write the setup, and then simplify one step at a time. The setup/work is $x = 1$ pairs with both 2 and 3: no. So the final answer is No.

3. Step by step: Read what the problem is asking, choose the matching rule, write the setup, and then simplify one step at a time. The setup/work is Repeated y -values are fine; each x is unique: yes. So the final answer is Yes.

4. Take it one move at a time: Read what the problem is asking, choose the matching rule, write the setup, and then simplify one step at a time. The setup/work is $x = 4$ pairs with both 1 and 2: no. So the final answer is No.

5. Start by naming the process: Read what the problem is asking, choose the matching rule, write the setup, and then simplify one step at a time. The setup/work is Every x is different: yes. So the final answer is Yes.

6. A good way to think about this is: Read what the problem is asking, choose the matching rule, write the setup, and then simplify one step at a time. The setup/work is $x = 2$ pairs with 2 and 4: no. So the final answer is No.

7. Step by step: Read what the problem is asking, choose the matching rule, write the setup, and then simplify one step at a time. The setup/work is Each x is unique (same y is okay): yes. So the final answer is Yes.

8. Take it one move at a time: Read what the problem is asking, choose the matching rule, write the setup, and then simplify one step at a time. The setup/work is $x = 1$ appears with 1 and 4: no. So the final answer is No.

9. Start by naming the process: Read what the problem is asking, choose the matching rule, write the setup, and then simplify one step at a time. The setup/work is No input is repeated: yes. So the final answer is Yes.

10. A good way to think about this is: Read what the problem is asking, choose the matching rule, write the setup, and then simplify one step at a time. The setup/work is It fails the vertical line test: no. So the final answer is No.

11. Step by step: Read what the problem is asking, choose the matching rule, write the setup, and then simplify one step at a time. The setup/work is Each x is unique: yes. So the final answer is Yes.

12. Take it one move at a time: Read what the problem is asking, choose the matching rule, write the setup, and then simplify one step at a time. The setup/work is $x = 0$ has two outputs: no. So the final answer is No.

13. Start by naming the process: Read what the problem is asking, choose the matching rule, write the setup, and then simplify one step at a time. The setup/work is All x -values differ: yes. So the final answer is Yes.

14. A good way to think about this is: Read what the problem is asking, choose the matching rule, write the setup, and then simplify one step at a time. The setup/work is $x = 2$ pairs with 6 and 8: no. So the final answer is No.

15. Step by step: Read what the problem is asking, choose the matching rule, write the setup, and then simplify one step at a time. The setup/work is One output per input: yes. So the final answer is Yes.

16. Take it one move at a time: Read what the problem is asking, choose the matching rule, write the setup, and then simplify one step at a time. The setup/work is Each person has one birth month: yes. So the final answer is Yes.

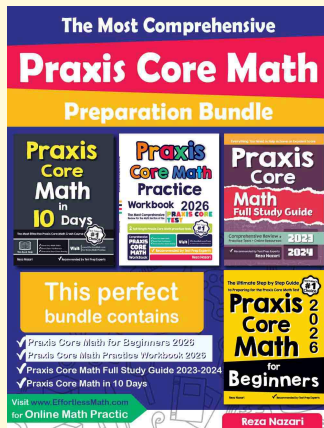
17. Start by naming the process: Read what the problem is asking, choose the matching rule, write the setup, and then simplify one step at a time. The setup/work is 4 has two roots (2 and -2): no. So the final answer is No.

18. A good way to think about this is: Read what the problem is asking, choose the matching rule, write the setup, and then simplify one step at a time. The setup/work is Every x is unique: yes. So the final answer is Yes.



Keep Building Praxis Core Math Skills

Recommended Effortless Math resources



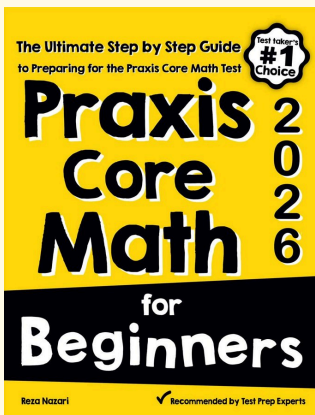
The Most Comprehensive Praxis Core Math Preparation Bundle

Use the complete Praxis Core Math resource for review, worked examples, extra practice, and test-style questions after each worksheet.



Scan Me
Download Instantly

STUDENT FAVORITE - Praxis Core Math for Beginners



Praxis Core Math for Beginners 2026

Step-by-step lessons, topic practice, and full review support for students who want a calm path through Praxis Core Math preparation.

A strong companion for self-study, tutoring, homework, and targeted review.

PDF Edition



Scan Me
Download Instantly

For more Praxis Core Math prep, visit EffortlessMath.com/Praxis-Core