

The Distributive Property

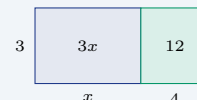
Name: _____ Date: _____ Score: _____ / 18

Quick Review and Helpful Hints

The distributive property says $a(b + c) = ab + ac$: multiply the factor outside the parentheses by *each* term inside, then combine. It works with subtraction too: $a(b - c) = ab - ac$. A negative factor in front flips the sign of every term inside.

▶ **Example:** Expand $3(x + 4)$. **Work:** Multiply the 3 by each term inside: $3 \cdot x = 3x$ and $3 \cdot 4 = 12$. Then write them as a sum.

★ **Answer:** $3x + 12$



$$3(x + 4) = 3x + 12.$$

◆ Practice Problems

Expand and simplify each expression.

- | | |
|---|---|
| <p>1. $2(x + 5)$ _____</p> <p>2. $4(x - 3)$ _____</p> <p>3. $5(2x + 1)$ _____</p> <p>4. $3(a - 2)$ _____</p> <p>5. $-2(x + 4)$ _____</p> <p>6. $6(x + 2)$ _____</p> <p>7. $-3(2x - 1)$ _____</p> | <p>8. $7(x - 5)$ _____</p> <p>9. $2(3a + 4)$ _____</p> <p>10. $-(x + 6)$ _____</p> <p>11. $4(2x + 3y)$ _____</p> <p>12. $5(x - 1) + 2$ _____</p> <p>13. $-4(2 - x)$ _____</p> <p>14. $3(x + 2) + 4x$ _____</p> |
|---|---|

◆ Word Problems

15. A garden has 4 rows, and each row has $(x + 3)$ plants. Write and simplify the total number of plants. _____
16. A rectangle is 5 units tall and $(2x + 1)$ units wide. Write a simplified expression for its area. _____
17. Each gift bag holds $(x - 2)$ candies. Write and simplify the total for 6 bags. _____
18. For a school fundraiser, one table packs 2 boxes with $(x + 5)$ flyers each and another packs 3 boxes with $(x - 1)$ flyers each. Write a simplified expression for the total flyers. _____



Answer Keys

1. $2x + 10$

2. $4x - 12$

3. $10x + 5$

4. $3a - 6$

5. $-2x - 8$

6. $6x + 12$

7. $-6x + 3$

8. $7x - 35$

9. $6a + 8$

10. $-x - 6$

11. $8x + 12y$

12. $5x - 3$

13. $4x - 8$

14. $7x + 6$

15. $4x + 12$

16. $10x + 5$

17. $6x - 12$

18. $5x + 7$

Step-by-Step Explanations

1. Start by naming the process: Read what the problem is asking, choose the matching rule, write the setup, and then simplify one step at a time. The setup/work is Multiply the 2 by each term inside the parentheses: $2 \cdot x = 2x$ and $2 \cdot 5 = 10$. Write them as a sum: $2x + 10$. So the final answer is $2x + 10$.

2. A good way to think about this is: Read what the problem is asking, choose the matching rule, write the setup, and then simplify one step at a time. The setup/work is Distribute the 4: $4 \cdot x = 4x$ and $4 \cdot 3 = 12$. Keep the subtraction: $4x - 12$. So the final answer is $4x - 12$.

3. Step by step: Read what the problem is asking, choose the matching rule, write the setup, and then simplify one step at a time. The setup/work is Multiply the 5 by each term: $5 \cdot 2x = 10x$ and $5 \cdot 1 = 5$, giving $10x + 5$. So the final answer is $10x + 5$.

4. Take it one move at a time: Read what the problem is asking, choose the matching rule, write the setup, and then simplify one step at a time. The setup/work is Distribute the 3: $3 \cdot a = 3a$ and $3 \cdot 2 = 6$, so $3a - 6$. So the final answer is $3a - 6$.

5. Start by naming the process: Read what the problem is asking, choose the matching rule, write the setup, and then simplify one step at a time. The setup/work is A negative factor flips each sign inside: $-2 \cdot x = -2x$ and $-2 \cdot 4 = -8$, giving $-2x - 8$. So the final answer is $-2x - 8$.

6. A good way to think about this is: Read what the problem is asking, choose the matching rule, write the setup, and then simplify one step at a time. The setup/work is Multiply the 6 by each term: $6 \cdot x = 6x$ and $6 \cdot 2 = 12$, so $6x + 12$. So the final answer is $6x + 12$.

7. Step by step: Read what the problem is asking, choose the matching rule, write the setup, and then simplify one step at a time. The setup/work is Distribute -3 : $-3 \cdot 2x = -6x$ and $-3 \cdot (-1) = +3$, giving $-6x + 3$. So the final answer is $-6x + 3$.

8. Take it one move at a time: Read what the problem is asking, choose the matching rule, write the setup, and then simplify one step at a time. The setup/work is Multiply the 7 by each term: $7 \cdot x = 7x$ and $7 \cdot 5 = 35$, so $7x - 35$. So the final answer is $7x - 35$.

9. Start by naming the process: Read what the problem is asking, choose the matching rule, write the setup, and then simplify one step at a time. The setup/work is Distribute the 2: $2 \cdot 3a = 6a$ and $2 \cdot 4 = 8$, giving $6a + 8$. So the final answer is $6a + 8$.

10. A good way to think about this is: Read what the problem is asking, choose the matching rule, write the setup, and then simplify one step at a time. The setup/work is The -1 in front flips both signs: $-x - 6$. So the final answer is $-x - 6$.

11. Step by step: Read what the problem is asking, choose the matching rule, write the setup, and then simplify one step at a time. The setup/work is Multiply the 4 by each term: $4 \cdot 2x = 8x$ and $4 \cdot 3y = 12y$, giving $8x + 12y$. So the final answer is $8x + 12y$.

12. Take it one move at a time: Read what the problem is asking, choose the matching rule, write the setup, and then simplify one step at a time. The setup/work is First distribute: $5 \cdot x - 5 \cdot 1 = 5x - 5$. Then combine the numbers: $-5 + 2 = -3$, giving $5x - 3$. So the final answer is $5x - 3$.

13. Start by naming the process: Read what the problem is asking, choose the matching rule, write the setup, and then simplify one step at a time. The setup/work is Distribute -4 : $-4 \cdot 2 = -8$ and $-4 \cdot (-x) = +4x$. Written in order: $4x - 8$. So the final answer is $4x - 8$.

14. A good way to think about this is: Read what the problem is asking, choose the matching rule, write the setup, and then simplify one step at a time. The setup/work is Distribute the 3: $3x + 6$. Then add the $4x$: $3x + 4x = 7x$, giving $7x + 6$. So the final answer is $7x + 6$.

15. Step by step: Read what the problem is asking, choose the matching rule, write the setup, and then simplify one step at a time. The setup/work is Each of the 4 rows has $(x + 3)$ plants, so the total is $4(x + 3) = 4x + 12$ plants. So the final answer is $4x + 12$.

16. Take it one move at a time: Read what the problem is asking, choose the matching rule, write the setup, and then simplify one step at a time. The setup/work is Area is height times width: $5(2x + 1) = 5 \cdot 2x + 5 \cdot 1 = 10x + 5$. So the final answer is $10x + 5$.

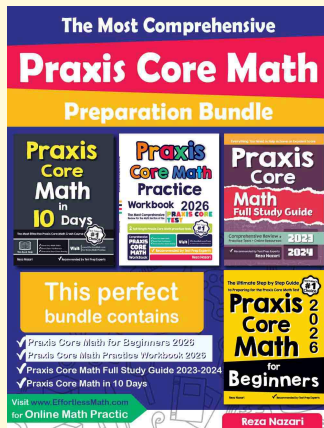
17. Start by naming the process: Read what the problem is asking, choose the matching rule, write the setup, and then simplify one step at a time. The setup/work is Six bags each hold $(x - 2)$ candies: $6(x - 2) = 6x - 12$. So the final answer is $6x - 12$.

18. A good way to think about this is: Read what the problem is asking, choose the matching rule, write the setup, and then simplify one step at a time. The setup/work is Distribute both groups: $2(x + 5) = 2x + 10$ and $3(x - 1) = 3x - 3$. Combine: $2x + 3x = 5x$ and $10 - 3 = 7$, giving $5x + 7$. So the final answer is $5x + 7$.



Keep Building Praxis Core Math Skills

Recommended Effortless Math resources



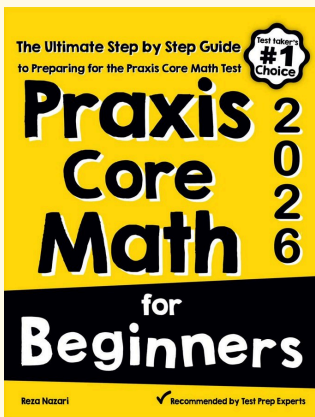
The Most Comprehensive Praxis Core Math Preparation Bundle

Use the complete Praxis Core Math resource for review, worked examples, extra practice, and test-style questions after each worksheet.



Scan Me
Download Instantly

STUDENT FAVORITE - Praxis Core Math for Beginners



Praxis Core Math for Beginners 2026

Step-by-step lessons, topic practice, and full review support for students who want a calm path through Praxis Core Math preparation.

A strong companion for self-study, tutoring, homework, and targeted review.

PDF Edition



Scan Me
Download Instantly

For more Praxis Core Math prep, visit [EffortlessMath.com/Praxis-Core](https://www.EffortlessMath.com/Praxis-Core)