

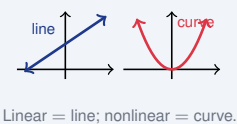
Linear and Nonlinear Functions

Name: _____ Date: _____ Score: _____ / 18

Quick Review and Helpful Hints

A *linear* function has a constant rate of change and graphs as a straight line; its equation looks like $y = mx + b$ (the variable is only to the first power). A *nonlinear* function (like $y = x^2$ or $y = \frac{1}{x}$) curves and changes its rate.

▶ **Example:** Is $y = 3x - 2$ linear or nonlinear? **Work:** The variable x is to the first power and the form is $y = mx + b$, so the graph is a straight line.
 ★ **Answer:** Linear



◆ Practice Problems

Tell whether each function is Linear or Nonlinear.

- | | |
|--|---|
| <p>1. $y = 2x + 1$ _____</p> <p>2. $y = x^2$ _____</p> <p>3. $y = -4x$ _____</p> <p>4. $y = x^3 + 1$ _____</p> <p>5. $y = 5$ _____</p> <p>6. $y = \frac{1}{x}$ _____</p> <p>7. $y = \frac{1}{2}x - 3$ _____</p> | <p>8. $y = 2^x$ _____</p> <p>9. $y = 7 - x$ _____</p> <p>10. $y = \sqrt{x}$ _____</p> <p>11. Table $y: 2, 4, 6, 8$ (equal steps) _____</p> <p>12. Table $y: 1, 4, 9, 16$ _____</p> <p>13. $y = x^2 - 2x$ _____</p> <p>14. $y = -x + 6$ _____</p> |
|--|---|

◆ Word Problems

15. A car travels at a constant 60 mph. Is distance vs. time linear or nonlinear? _____
16. A population doubles every year. Is that growth linear or nonlinear? _____
17. A function in the form $y = mx + b$ always graphs as what kind of shape? _____
18. The graph of $y = x^2$ is a curve. What is that curve called? _____



Answer Keys

- | | | |
|--------------|---------------|-------------------|
| 1. Linear | 7. Linear | 13. Nonlinear |
| 2. Nonlinear | 8. Nonlinear | 14. Linear |
| 3. Linear | 9. Linear | 15. Linear |
| 4. Nonlinear | 10. Nonlinear | 16. Nonlinear |
| 5. Linear | 11. Linear | 17. straight line |
| 6. Nonlinear | 12. Nonlinear | 18. parabola |

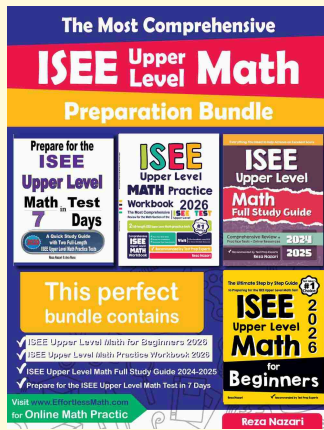
Step-by-Step Explanations

1. Start by naming the process: Read what the problem is asking, choose the matching rule, write the setup, and then simplify one step at a time. The setup/work is Form $y = mx + b$, first power: linear. So the final answer is Linear.
2. A good way to think about this is: Read what the problem is asking, choose the matching rule, write the setup, and then simplify one step at a time. The setup/work is x is squared: nonlinear. So the final answer is Nonlinear.
3. Step by step: Read what the problem is asking, choose the matching rule, write the setup, and then simplify one step at a time. The setup/work is $y = -4x$ fits $y = mx + b$: linear. So the final answer is Linear.
4. Take it one move at a time: Read what the problem is asking, choose the matching rule, write the setup, and then simplify one step at a time. The setup/work is x is cubed: nonlinear. So the final answer is Nonlinear.
5. Start by naming the process: Read what the problem is asking, choose the matching rule, write the setup, and then simplify one step at a time. The setup/work is A constant gives a flat line: linear. So the final answer is Linear.
6. A good way to think about this is: Read what the problem is asking, choose the matching rule, write the setup, and then simplify one step at a time. The setup/work is x is in the denominator: nonlinear. So the final answer is Nonlinear.
7. Step by step: Read what the problem is asking, choose the matching rule, write the setup, and then simplify one step at a time. The setup/work is First power, $y = mx + b$ form: linear. So the final answer is Linear.
8. Take it one move at a time: Read what the problem is asking, choose the matching rule, write the setup, and then simplify one step at a time. The setup/work is x is an exponent: nonlinear. So the final answer is Nonlinear.
9. Start by naming the process: Read what the problem is asking, choose the matching rule, write the setup, and then simplify one step at a time. The setup/work is $y = 7 - x$ is $y = -x + 7$: linear. So the final answer is Linear.
10. A good way to think about this is: Read what the problem is asking, choose the matching rule, write the setup, and then simplify one step at a time. The setup/work is A square root curves: nonlinear. So the final answer is Nonlinear.
11. Step by step: Read what the problem is asking, choose the matching rule, write the setup, and then simplify one step at a time. The setup/work is Equal steps mean a constant rate: linear. So the final answer is Linear.
12. Take it one move at a time: Read what the problem is asking, choose the matching rule, write the setup, and then simplify one step at a time. The setup/work is Differences 3, 5, 7 change: nonlinear. So the final answer is Nonlinear.
13. Start by naming the process: Read what the problem is asking, choose the matching rule, write the setup, and then simplify one step at a time. The setup/work is Contains x^2 : nonlinear. So the final answer is Nonlinear.
14. A good way to think about this is: Read what the problem is asking, choose the matching rule, write the setup, and then simplify one step at a time. The setup/work is Fits $y = mx + b$: linear. So the final answer is Linear.
15. Step by step: Read what the problem is asking, choose the matching rule, write the setup, and then simplify one step at a time. The setup/work is Constant speed gives a straight line: linear. So the final answer is Linear.
16. Take it one move at a time: Read what the problem is asking, choose the matching rule, write the setup, and then simplify one step at a time. The setup/work is Doubling is exponential: nonlinear. So the final answer is Nonlinear.
17. Start by naming the process: Read what the problem is asking, choose the matching rule, write the setup, and then simplify one step at a time. The setup/work is $y = mx + b$ graphs as a straight line. So the final answer is straight line.
18. A good way to think about this is: Read what the problem is asking, choose the matching rule, write the setup, and then simplify one step at a time. The setup/work is $y = x^2$ graphs as a parabola. So the final answer is parabola.



Keep Building ISEE Upper-Level Math Skills

Recommended Effortless Math resources




Use the complete ISEE Upper-Level Math resource for review, worked examples, extra practice, and test-style questions after each worksheet.



Scan Me
Download Instantly

STUDENT FAVORITE - ISEE Upper Level Math Practice Workbook 2026



ISEE Upper Level Math Practice Workbook 2026

Step-by-step lessons, topic practice, and full review support for students who want a calm path through ISEE Upper-Level Math preparation.

A strong companion for self-study, tutoring, homework, and targeted review.

PDF Edition



Scan Me
Download Instantly