

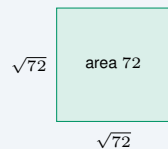
Simplifying Radicals

Name: _____ Date: _____ Score: _____ / 18

Quick Review and Helpful Hints

A square root \sqrt{a} asks “what nonnegative number squared gives a ?” To simplify, pull out the largest *perfect square* factor: $\sqrt{a^2b} = a\sqrt{b}$. Multiply or divide roots with $\sqrt{a} \cdot \sqrt{b} = \sqrt{ab}$. Combine *like* radicals (the same number under the root) by adding or subtracting their coefficients.

▶ **Example:** Simplify $\sqrt{72}$. **Work:** Factor out the largest perfect square: $72 = 36 \cdot 2$, and 36 is a perfect square. So $\sqrt{72} = \sqrt{36} \cdot \sqrt{2} = 6\sqrt{2}$.
 ★ **Answer:** $6\sqrt{2}$



$\sqrt{72} = 6\sqrt{2}$ is the side of a square of area 72.

◆ Practice Problems

Simplify each radical expression.

- | | |
|--|---|
| <p>1. $\sqrt{49}$ _____</p> <p>2. $\sqrt{12}$ _____</p> <p>3. $\sqrt{50}$ _____</p> <p>4. $\sqrt{18}$ _____</p> <p>5. $\sqrt{8}$ _____</p> <p>6. $\sqrt{45}$ _____</p> <p>7. $\sqrt{100}$ _____</p> | <p>8. $\sqrt{32}$ _____</p> <p>9. $\sqrt{75}$ _____</p> <p>10. $\sqrt{2} \cdot \sqrt{8}$ _____</p> <p>11. $3\sqrt{5} + 2\sqrt{5}$ _____</p> <p>12. $\sqrt{200}$ _____</p> <p>13. $\sqrt{27}$ _____</p> <p>14. $\frac{\sqrt{50}}{\sqrt{2}}$ _____</p> |
|--|---|

◆ Word Problems

15. A square room has an area of 144 square feet. What is the length of one side? _____
16. A square garden has an area of 50 square meters. Write its side length in simplest radical form. _____
17. A square tile has an area of 32 square inches. Write its side length in simplest radical form. _____
18. A square has an area of 18 square centimeters. Write its side length in simplest radical form. _____



Answer Keys

- | | | |
|------------------------|--------------------------|------------------------------------|
| 1. $\boxed{7}$ | 7. $\boxed{10}$ | 13. $\boxed{3\sqrt{3}}$ |
| 2. $\boxed{2\sqrt{3}}$ | 8. $\boxed{4\sqrt{2}}$ | 14. $\boxed{5}$ |
| 3. $\boxed{5\sqrt{2}}$ | 9. $\boxed{5\sqrt{3}}$ | 15. $\boxed{12 \text{ ft}}$ |
| 4. $\boxed{3\sqrt{2}}$ | 10. $\boxed{4}$ | 16. $\boxed{5\sqrt{2} \text{ m}}$ |
| 5. $\boxed{2\sqrt{2}}$ | 11. $\boxed{5\sqrt{5}}$ | 17. $\boxed{4\sqrt{2} \text{ in}}$ |
| 6. $\boxed{3\sqrt{5}}$ | 12. $\boxed{10\sqrt{2}}$ | 18. $\boxed{3\sqrt{2} \text{ cm}}$ |

Step-by-Step Explanations

1. Start by naming the process: Read what the problem is asking, choose the matching rule, write the setup, and then simplify one step at a time. The setup/work is Ask yourself "what number squared gives 49?" Since $7 \times 7 = 49$, the root is 7. So the final answer is 7.

2. A good way to think about this is: Read what the problem is asking, choose the matching rule, write the setup, and then simplify one step at a time. The setup/work is Pull out the perfect-square factor: $12 = 4 \cdot 3$, so $\sqrt{12} = \sqrt{4} \sqrt{3} = 2\sqrt{3}$. So the final answer is $2\sqrt{3}$.

3. Step by step: Read what the problem is asking, choose the matching rule, write the setup, and then simplify one step at a time. The setup/work is $50 = 25 \cdot 2$, and 25 is a perfect square, so $\sqrt{50} = 5\sqrt{2}$. So the final answer is $5\sqrt{2}$.

4. Take it one move at a time: Read what the problem is asking, choose the matching rule, write the setup, and then simplify one step at a time. The setup/work is $18 = 9 \cdot 2$, so $\sqrt{18} = 3\sqrt{2}$. So the final answer is $3\sqrt{2}$.

5. Start by naming the process: Read what the problem is asking, choose the matching rule, write the setup, and then simplify one step at a time. The setup/work is $8 = 4 \cdot 2$, giving $\sqrt{8} = 2\sqrt{2}$. So the final answer is $2\sqrt{2}$.

6. A good way to think about this is: Read what the problem is asking, choose the matching rule, write the setup, and then simplify one step at a time. The setup/work is $45 = 9 \cdot 5$, so $\sqrt{45} = 3\sqrt{5}$. So the final answer is $3\sqrt{5}$.

7. Step by step: Read what the problem is asking, choose the matching rule, write the setup, and then simplify one step at a time. The setup/work is $100 = 10^2$ is a perfect square, so the root is exactly 10 with no radical left. So the final answer is 10.

8. Take it one move at a time: Read what the problem is asking, choose the matching rule, write the setup, and then simplify one step at a time. The setup/work is The largest perfect-square factor of 32 is 16: $\sqrt{32} = \sqrt{16} \sqrt{2} = 4\sqrt{2}$. So the final answer is $4\sqrt{2}$.

9. Start by naming the process: Read what the problem is asking, choose the matching rule, write the setup, and then simplify one step at a time. The setup/work is $75 = 25 \cdot 3$, so $\sqrt{75} = 5\sqrt{3}$. So the final answer is $5\sqrt{3}$.

10. A good way to think about this is: Read what the problem is asking, choose the matching rule, write the setup, and then simplify one step at a time. The setup/work is Multiply under one root first: $\sqrt{2} \cdot \sqrt{8} = \sqrt{16} = 4$. So the final answer is 4.

11. Step by step: Read what the problem is asking, choose the matching rule, write the setup, and then simplify one step at a time. The setup/work is These are like radicals (both $\sqrt{5}$), so add the coefficients: $3 + 2 = 5$, giving $5\sqrt{5}$. So the final answer is $5\sqrt{5}$.

12. Take it one move at a time: Read what the problem is asking, choose the matching rule, write the setup, and then simplify one step at a time. The setup/work is $200 = 100 \cdot 2$, so $\sqrt{200} = 10\sqrt{2}$. So the final answer is $10\sqrt{2}$.

13. Start by naming the process: Read what the problem is asking, choose the matching rule, write the setup, and then simplify one step at a time. The setup/work is $27 = 9 \cdot 3$, so $\sqrt{27} = 3\sqrt{3}$. So the final answer is $3\sqrt{3}$.

14. A good way to think about this is: Read what the problem is asking, choose the matching rule, write the setup, and then simplify one step at a time. The setup/work is Combine under a single root: $\sqrt{\frac{50}{2}} = \sqrt{25} = 5$. So the final answer is 5.

15. Step by step: Read what the problem is asking, choose the matching rule, write the setup, and then simplify one step at a time. The setup/work is The side of a square is the square root of its area: $\sqrt{144} = 12$ feet. So the final answer is 12 ft.

16. Take it one move at a time: Read what the problem is asking, choose the matching rule, write the setup, and then simplify one step at a time. The setup/work is Side = $\sqrt{50} = \sqrt{25 \cdot 2} = 5\sqrt{2}$ meters. So the final answer is $5\sqrt{2}$ m.

17. Start by naming the process: Read what the problem is asking, choose the matching rule, write the setup, and then simplify one step at a time. The setup/work is Side = $\sqrt{32} = \sqrt{16 \cdot 2} = 4\sqrt{2}$ inches. So the final answer is $4\sqrt{2}$ in.

18. A good way to think about this is: Read what the problem is asking, choose the matching rule, write the setup, and then simplify one step at a time. The setup/work is Side = $\sqrt{18} = \sqrt{9 \cdot 2} = 3\sqrt{2}$ centimeters. So the final answer is $3\sqrt{2}$ cm.



Keep Building FTCE General Knowledge Math Skills

Recommended Effortless Math resources



The Most Comprehensive
FTCE Math
Preparation Bundle

This perfect bundle contains

- ✓ FTCE Math for Beginners 2026
- ✓ FTCE Math Practice Workbook 2026
- ✓ FTCE Math Full Study Guide 2024-2025
- ✓ FTCE Math in 10 Days!

Visit www.EffortlessMath.com for Online Math Practice


Reza Nazari

The Most Comprehensive FTCE Math Preparation Bundle



Scan Me
Download Instantly

STUDENT FAVORITE - FTCE General Knowledge Math for Beginners



The Ultimate Step by Step Guide
to Preparing for the FTCE General Knowledge Math Test

FTCE 2026
General Knowledge
Math 2026
for
Beginners

Reza Nazari


Recommended by Test Prep Experts

FTCE General Knowledge Math for Beginners 2026

Step-by-step lessons, topic practice, and full review support for students who want a calm path through FTCE General Knowledge Math preparation.

A strong companion for self-study, tutoring, homework, and targeted review.

PDF Edition



Scan Me
Download Instantly