

Scatter Plots and Correlation

Name: _____

Date: _____

Score: _____ / 26

Q Quick Review

A **scatter plot** shows paired data (x, y) as points. **Correlation** describes the direction and strength of the relationship: **positive** (both increase together), **negative** (one up, one down), or **none** (no clear pattern). **Strong** correlation = points cluster close to a line; **weak** = scattered. The **correlation coefficient** r ranges from -1 to 1 : $r = 1$ perfect positive, $r = -1$ perfect negative, $r = 0$ none. **Important:** correlation \neq causation. Two variables can correlate without one causing the other (they might both depend on a third factor).

PRACTICE

Identify correlation type or strength.

- A scatter plot of study hours and test scores has $r = 0.90$. Describe the direction and strength. _____
- A scatter plot of car age and resale value has $r = -0.85$. Describe the correlation. _____
- A scatter plot of minutes spent stretching and race time has $r = 0.10$. Describe the correlation. _____
- A scatter plot comparing shoe size and algebra quiz score has $r = 0$. What does that suggest? _____
- A scatter plot of outside temperature and hot-chocolate sales has $r = -0.30$. Describe the trend. _____
- A data set has $r = 1$ for distance traveled at constant speed and time. What kind of relationship is this? _____
- In a class survey, taller students generally have larger shoe sizes. What direction of correlation would you expect? _____
- A homeowner records colder outdoor temperatures and higher heater use. What direction of correlation is shown? _____
- A scatter plot compares shoe size and test score, and the points look scattered with no pattern. What is the correlation? _____
- A sleep study shows students who sleep more hours tend to report higher alertness. What direction is the correlation? _____
- A used-car lot compares car age and value. Older cars usually have lower values. What direction is the correlation? _____
- Ice cream sales and swimming accidents both rise in summer. Does this prove ice cream causes accidents? _____
- Two scatter plots have $r = 0.82$ and $r = -0.45$. Which one has the stronger linear relationship? _____
- A cyclist rides at a constant speed, so distance is exactly proportional to time. What correlation should the scatter plot have? _____
- Sample size affects r ? _____
- Causation requires... _____
- A scatter plot has $r = 0.50$. Describe the relationship. _____
- A scatter plot has $r = -0.99$. Describe the relationship. _____
- One data point is far away from the rest of a scatter plot. What can that outlier do to r ? _____
- A scatter plot has points scattered randomly with no upward or downward pattern. What is r approximately? _____



Scan Me

VISUAL PRACTICE

Use the graph, table, chart, or diagram to answer the question.

21. Describe the association shown by the scatter plot.



Answer: _____

22. Describe the association shown by the scatter plot.



Answer: _____

Word Problems

23. A study finds $r = 0.92$ between math practice hours and test score. Describe and interpret. _____

24. A survey of students gives $r = -0.4$ between weekly TV hours and course grades. Describe the relationship, and be careful about what the correlation does and does not prove. _____

25. Researchers find higher coffee drinkers also have more wrinkles, $r = 0.5$. Does coffee cause wrinkles? _____

26. You plot test scores vs. number of pets. The points are scattered randomly. What's r approximately? _____



Answer Keys

- | | |
|--|--|
| <ol style="list-style-type: none"> 1. strong positive 2. strong negative 3. weak positive 4. no correlation 5. weak negative 6. perfect positive 7. positive 8. negative 9. none 10. positive 11. negative 12. no; correlation is not causation 13. $r = 0.82$ | <ol style="list-style-type: none"> 14. perfect positive 15. not directly 16. controlled experiment 17. moderate positive 18. very strong negative 19. it can change r a lot 20. $r \approx 0$ 21. negative association 22. positive association 23. strong positive 24. moderate negative 25. no, correlation only 26. $r \approx 0$ |
|--|--|

Step-by-Step Tutor Notes

1. Because r is positive, the trend goes upward. Because 0.90 is close to 1, the relationship is strong.
2. The negative sign means the trend goes downward. The value is close to -1 , so the relationship is strong.
3. The coefficient is slightly positive but very close to 0, so the upward trend is weak.
4. Focus on the main idea of the problem, then simplify carefully. A value near 0 means there is no clear linear pattern in the points. So the answer is no correlation.
5. The sign is negative, so the trend slopes downward, but 0.30 is not close to 1, so it is weak.
6. This is a good place to slow down, check the notation, and simplify cleanly. An r value of 1 means all points fall exactly on an increasing line. So the answer is perfect positive.
7. Take it one clear step at a time and keep the original question in mind. As height increases, shoe size tends to increase too, so the direction is positive. So the answer is positive.
8. When temperature goes down, heater use goes up. One variable increases as the other decreases, so the correlation is negative.
9. There is no sensible upward or downward trend, so the data show little or no correlation.
10. This is a good place to slow down, check the notation, and simplify cleanly. Both quantities tend to increase together, so the relationship is positive. So the answer is positive.
11. Start with the definition the problem is testing, then apply it directly. Age increases while value tends to decrease, which is a negative relationship. So the answer is negative.
12. The variables may both be connected to warm weather. A correlation alone does not prove that one variable causes the other.
13. This is a good place to slow down, check the notation, and simplify cleanly. Strength is based on $|r|$. Since $|0.82| > |-0.45|$, the first relationship is stronger. So the answer is $r = 0.82$.
14. Take it one clear step at a time and keep the original question in mind. The points would lie on an increasing straight line, so the correlation is perfect positive. So the answer is perfect positive.
15. The formula for r does not use sample size by itself. What sample size changes is how much trust we place in the pattern: a larger sample usually gives a more reliable estimate.
16. Start with the definition the problem is testing, then apply it directly. Correlation alone can't establish causation. So the answer is controlled experiment.
17. The value is positive and not close to 0, but it is also not close to 1. That makes it moderate positive.
18. Take it one clear step at a time and keep the original question in mind. The value is almost -1 , so the points are very close to a decreasing line. So the answer is very strong negative.
19. The correlation coefficient is sensitive to extreme points, so one outlier can make the relationship look stronger or weaker.
20. Take it one clear step at a time and keep the original question in mind. When there is no linear pattern, the correlation coefficient is close to 0. So the answer is $r \approx 0$.
21. Focus on the main idea of the problem, then simplify carefully. The points trend downward from left to right, so the association is negative. So the answer is negative association.
22. Use the clue in the question first, then let the arithmetic finish the job. The points rise from left to right, so the association is positive. So the answer is positive association.
23. Strong positive correlation: more practice tends to mean higher scores. But correlation alone doesn't prove practice causes higher scores — motivated students might both practice more and score higher.
24. Moderate negative: more TV tends to mean lower grades, but the relationship isn't strong — many exceptions exist.
25. Could be that both relate to age, sun exposure, or stress. Correlation doesn't establish causation.
26. First identify the feature of the graph or equation that matches the wording of the question. No pattern means no linear relationship, r near zero. That leads to $r \approx 0$.



Want a Full Algebra 1 Textbook? Try Our Grade 9 Math Made Simple Book!



Grade 9 Math Algebra I Made Ridiculously Simple

The friendly, step-by-step Algebra 1 textbook
Plain-English explanations, guided practice, and review support.



Scan Me

Full Lessons Inside

Concepts
Practice
Mastery

Important: All our test books contain **unique, completely different tests** from each other! Each book offers fresh practice questions—no repeats!

5 Practice Tests

- ✓ 5 complete practice tests with detailed explanations
- ✓ Perfect foundation for Math test preparation
- ✓ Builds confidence and test-taking skills
- ✓ High-quality questions aligned with state standards

Start your practice journey!

6 Practice Tests

- ✓ 6 complete practice tests with detailed explanations
- ✓ **Unique tests**—different from the 5 tests book
- ✓ Perfect for more practice after mastering 5 tests
- ✓ Builds even more confidence and test-taking skills
- ✓ Same high-quality questions aligned with standards

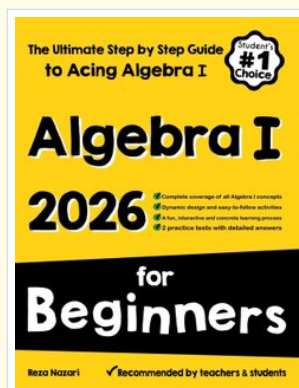
Take your practice to the next level!

7 Practice Tests

- ✓ 7 complete practice tests for maximum preparation
- ✓ **Unique tests**—different from 5 and 6 tests books
- ✓ The most comprehensive practice for Algebra 1
- ✓ Ideal for students aiming for top scores
- ✓ Extensive practice builds mastery and confidence

Go all the way with comprehensive practice!

STUDENT FAVORITE • Master Algebra I From the Ground Up



Algebra I for Beginners

Written by a top math teacher & aligned with national and state Algebra I courses. From linear equations to graphing quadratics — explained the easy way.

- ✓ **Complete coverage** of every Algebra I concept — perfect companion to these worksheets
- ✓ **Step-by-step explanations** with worked examples on every topic
- ✓ **QR codes in every chapter** for free video lessons & bonus practice
- ✓ **2 full-length practice tests** with detailed answer keys


- ✓ 100% Guaranteed
- ✓ Lifetime Support
- ✓ Trusted by Teachers

Start Your Algebra Journey Today! →

★ STUDENT'S #1 CHOICE ★

Teacher-recommended • 12,000+ Happy Students


↓ PDF EDITION



Scan Me

Instant download • any device

PAPERBACK



Scan Me

Paperback on Amazon

Hold it in your hands

Pair these free worksheets with *Algebra I for Beginners* and you have a complete self-paced course — concept lessons, daily practice, and full exam-style reviews, all in one path. →

EffortlessMath.com/product/algebra-i-for-beginners