

Writing Equations for Proportional Relationships

Name: _____

Date: _____

Score: _____ / 18

This is where all of Chapter 3 comes together in one neat package: the equation $y = kx$. It says that y is always a constant multiple of x , and that multiplier is k —the constant of proportionality you already know how to find. Pull k from a table, a graph, or a word problem, write the equation, and you can predict *any* missing value. Think of $y = kx$ as the bridge that turns a pattern you notice into algebra you can use!

Key Concepts & Quick Review

From a table: $k = \frac{y}{x}$, then write $y = kx$. **From a graph:** read any point (x, y) ; $k = \frac{y}{x}$; write $y = kx$.

From a description: identify the two quantities and the constant rate. Let x = independent quantity, y = dependent quantity, k = rate. Then $y = kx$. Use the equation to predict any value.

Examples

① A table shows hours worked (x) and pay (y): (1, \$12.50), (3, \$37.50), (5, \$62.50). Write an equation and find pay for 8 hours.

Think It Through: Find the constant of proportionality by dividing pay by hours. Using any point, $k = \frac{12.50}{1} = 12.50$. That means the pay equation is $y = 12.5x$. Once the equation is written, substitute $x = 8$: $y = 12.5 \times 8 = 100$. So the pay for 8 hours is \$100. The equation is a shortcut that lets you find any value in the pattern.

Answer: $y = 12.5x$; \$100 for 8 hours

② A recipe uses $\frac{2}{3}$ cup of olive oil per serving. Write an equation for the total oil y needed for x servings. How much oil is needed for 15 servings? For $\frac{3}{2}$ servings?

Think It Through: The recipe uses $\frac{2}{3}$ cup for each serving, so the constant of proportionality is $k = \frac{2}{3}$. That means the equation is $y = \frac{2}{3}x$, where x is servings and y is cups of oil. For 15 servings, $y = \frac{2}{3} \times 15 = 10$ cups. For $\frac{3}{2}$ servings, $y = \frac{2}{3} \times \frac{3}{2} = 1$ cup. The same equation works whether the number of servings is a whole number or a fraction.

Answer: $y = \frac{2}{3}x$; 10 cups for 15 serv.; 1 cup for $\frac{3}{2}$ serv.

Practice Problems




Write the equation $y = kx$ using the given information, or evaluate the equation for the given value.

- Write the equation $y = kx$ when $k = 4$, _____ then find y for $x = 6$.
- Write the equation $y = kx$ when $k = 7$, _____ then find y for $x = 9$.
- Write the equation $y = kx$ when $k = 2.5$, _____ then find y for $x = 8$.
- Write the equation $y = kx$ when $k = \frac{1}{4}$, _____ then find y for $x = 20$.



5. Use $y = kx$ with $k = 3$ and $y = 24$ to find x .
6. Use $y = kx$ with $k = 6$ and $y = 42$ to find x .
7. Use $y = kx$ with $k = 0.5$ and $y = 3.5$ to find x .
8. Use $y = kx$ with $k = \frac{3}{5}$ and $y = 12$ to find x .
9. The point $(2, 10)$ lies on $y = kx$. Find k and write the equation.
10. The point $(4, 6)$ lies on $y = kx$. Find k and write the equation.
11. The point $(5, \frac{5}{3})$ lies on $y = kx$. Find k and write the equation.
12. The point $(9, 27)$ lies on $y = kx$. Find k and write the equation.
13. Use the equation $y = 8x$ to find y when $x = 3.5$.
14. Use the equation $y = \frac{2}{3}x$ to find y when $x = 9$.
15. Use the equation $y = 1.2x$ to find y when $x = 15$.

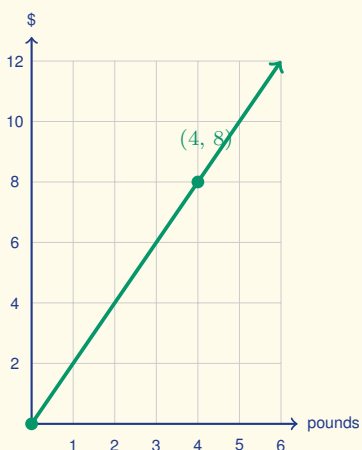
Study Tips

-  The equation $y = kx$ is the **algebraic form** of a proportional relationship. Every table, graph, and word problem in this chapter leads to exactly this form.
-  Always define your **variables with units** before writing the equation: “Let $x =$ hours, $y =$ miles, $k = 55$ mph,” then $y = 55x$.
-  Use the equation to **work backwards**: if you know y and k , solve $x = \frac{y}{k}$ — this is just a proportion in disguise.

Word Problems

16. A printing press produces 1,800 pages in $\frac{3}{4}$ of an hour. Let x be the time in hours and y the total pages printed. Find k , write the equation, and determine how many pages are printed in a 7.5-hour shift. How many minutes does it take to print 600 pages? _____
17. Three friends each run at a constant speed. Amir runs 2 mi in $\frac{1}{4}$ hour. Bea runs 9 mi in $\frac{3}{4}$ hour. Carlos's equation is $y = 11x$ where y is miles and x is hours. Write equations for Amir and Bea, identify who is fastest and who is slowest, and find how far each person runs in 2 hours. _____
18. This graph shows the cost in dollars of buying x pounds of trail mix. Use the highlighted lattice point to write the equation that models the relationship in the form $y = kx$, and use it to find the cost of 9 pounds of trail mix.





Answer Keys

1) 24

2) 63

3) 20

4) 5

5) 8

6) 7

7) 7

8) 20

9) 5

10) 1.5

11) $\frac{1}{3}$

12) 3

13) 28

14) 6

15) 18

16) $k = 2400$ pages/hr; $y = 2400x$; 18,000 pages; 15 min17) Amir: $y = 8x$; Bea: $y = 12x$; Bea fastest; Amir slowest; 16, 24, and 22 mi18) $k = 2$; $y = 2x$; \$18

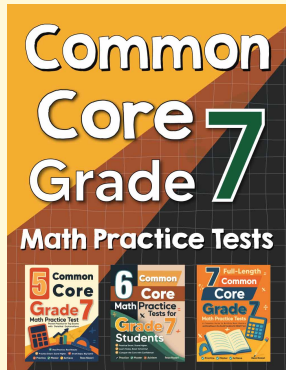
Step-by-Step Explanations

Tutoring notes not found for this topic.



Want Even More Practice?

Check Out Our Other New Hampshire NH SAS Test Books!



New Hampshire NH SAS Grade 7 Math Preparation Bundle

18 full-length practice tests across three books (5 + 6 + 7)

No repeated questions—maximum practice value!



18 Tests!
3 Books
One Bundle

Important: All our test books contain **unique, completely different tests** from each other! Each book offers fresh practice questions—no repeats!

5 Practice Tests

- ✓ 5 complete practice tests with detailed explanations
- ✓ Perfect foundation for NH SAS test preparation
- ✓ Builds confidence and test-taking skills
- ✓ High-quality questions aligned with state standards

Start your practice journey!

6 Practice Tests

- ✓ 6 complete practice tests with detailed explanations
- ✓ **Unique tests**—different from the 5 tests book
- ✓ Perfect for more practice after mastering 5 tests
- ✓ Builds even more confidence and test-taking skills
- ✓ Same high-quality questions aligned with standards

Take your practice to the next level!

7 Practice Tests

- ✓ 7 complete practice tests for maximum preparation
- ✓ **Unique tests**—different from 5 and 6 tests books
- ✓ The most comprehensive practice for Grade 7
- ✓ Ideal for students aiming for top scores
- ✓ Extensive practice builds mastery and confidence

Go all the way with comprehensive practice!