

Unknown Numbers in Equations

When an equation has a question mark or a box, ask: “What operation makes the equation true?” Then *undo* that operation on the other side to find the unknown.


If the equation is ...	Undo with ...
$? + a = b$	subtraction: $? = b - a$
$? - a = b$	addition: $? = b + a$
$? \times a = b$	division: $? = b \div a$
$? \div a = b$	multiplication: $? = b \times a$

Key Concepts

1. An equation with an unknown asks: “What number makes this true?”
2. To find the unknown, do the *opposite* of what’s happening to it. Addition undoes subtraction. Multiplication undoes division.
3. Always **check** by plugging your answer back into the original equation.
4. The unknown can be on the left or the right of the equals sign — the strategy is the same.


Worked Examples

① Solve: $? + 14 = 30$.

 The unknown plus 14 equals 30. Undo the “+14” by subtracting 14 from 30: $? = 30 - 14 = 16$. Check: $16 + 14 = 30$ ✓.

 **Answer: 16**

② Solve: $? - 9 = 27$.

 The unknown minus 9 equals 27. Undo the “-9” by adding 9 to 27: $? = 27 + 9 = 36$. Check: $36 - 9 = 27$ ✓.

 **Answer: 36**

③ Solve: $? \times 6 = 42$.

 The unknown times 6 equals 42. Undo the “×6” by dividing 42 by 6: $? = 42 \div 6 = 7$. Check: $7 \times 6 = 42$ ✓.

 **Answer: 7**

Practice Problems

Find the unknown number.

1. $? + 8 = 25$ _____

3. $? \times 5 = 35$ _____

2. $? - 15 = 34$ _____

4. $? \div 4 = 9$ _____

5. $17 + ? = 50$ _____

6. $? - 22 = 48$ _____

7. $? \times 8 = 56$ _____

8. $? \div 7 = 6$ _____

9. $? + 36 = 81$ _____

10. $? - 19 = 41$ _____

11. $? \times 9 = 63$ _____

12. $? \div 3 = 8$ _____

Study Tips

- 👉 Each operation has an opposite. Memorize the pairs: $+$ undoes $-$; \times undoes \div .
- 👉 Always plug your answer back into the original equation. If it works, you're done.
- 👉 For " $? \div a = b$ " the trick is to *multiply* both sides by a . The unknown turns out to be $a \times b$.

Word Problems

1. Jake had some baseball cards. He gave away 12 and now has 35. How many did he start with? Write an equation.

Answer: _____

2. A baker puts muffins into bags of 6. She fills ? bags and uses 54 muffins in all. How many bags?

Answer: _____

Answer Key — with Friendly Explanations**Practice Problems**

1. Undo addition: $25 - 8 = 17$.

 **Answer:** 17

2. Undo subtraction: $34 + 15 = 49$.

 **Answer:** 49

3. Undo multiplication: $35 \div 5 = 7$.

 **Answer:** 7

4. Undo division: $9 \times 4 = 36$.

 **Answer:** 36

5. Undo addition: $50 - 17 = 33$.

 **Answer:** 33

6. Undo subtraction: $48 + 22 = 70$.

 **Answer:** 70

7. Undo multiplication: $56 \div 8 = 7$.

 **Answer:** 7

8. Undo division: $6 \times 7 = 42$.

 **Answer:** 42

9. Undo addition: $81 - 36 = 45$.

 **Answer:** 45

10. Undo subtraction: $41 + 19 = 60$.

 **Answer:** 60

11. Undo multiplication: $63 \div 9 = 7$.

 **Answer:** 7

12. Undo division: $8 \times 3 = 24$.

 **Answer:** 24**Word Problems**

1. $? - 12 = 35 \Rightarrow ? = 47$.

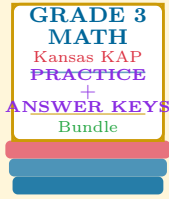
 **Answer:** 47 cards

2. $? \times 6 = 54 \Rightarrow ? = 9$.

 **Answer:** 9 bags

Want a Complete Grade 3 Math Program?

Check Out Our Kansas KAP Grade 3 Math Bundle!



Kansas KAP Grade 3 Math Bundle

Practice tests, complete answer keys, and step-by-step explanations
Everything a third grader needs to feel ready!

Tests +
Answer Keys
One Bundle

Find it online:

<https://www.effortlessmath.com/product/kansas-kap-grade-3-math-made-ridiculously-simple/>

Important: This bundle combines the practice and the explanations into one easy-to-print package designed for Grade 3 students. **Made for parents, teachers, and tutors who want everything in one place.**

Full Practice Tests

- ✓ Complete KAP-style practice tests
- ✓ Mirrors the real exam format and difficulty
- ✓ Builds test-taking confidence
- ✓ Aligned with state Grade 3 math standards

Start with a full-length practice test!

Step-by-Step Answer Keys

- ✓ Every question worked out, not just an answer
- ✓ Friendly, third-grade-ready explanations
- ✓ Catches and explains common misconceptions
- ✓ Parents can help even without a math background

Learn from every mistake!

Single-Skill Worksheets

- ✓ Targets one Grade 3 math skill per page
- ✓ Covers place value, multiplication, fractions, measurement, geometry
- ✓ Includes a Quick Review + Practice + Word Problems
- ✓ Built-in friendly Answer Key for self-checking

Master one skill at a time!