

Three-Dimensional Shapes

Solids have three dimensions: length, width, and height. Each solid has faces (flat sides), edges (where faces meet), and vertices (corners). Count them carefully.


Solid	Faces	Edges	Vertices
Cube	6	12	8
Rectangular prism	6	12	8
Triangular prism	5	9	6
Cylinder	2 flat + 1 curved	2 circular	0
Cone	1 flat + 1 curved	1 circular	1
Sphere	0 flat	0	0

Key Concepts

- Faces** are the flat surfaces. **Edges** are the line segments where two faces meet. **Vertices** are the corners where edges meet.
- A **cube** has 6 square faces, 12 edges, and 8 vertices.
- A **cylinder** has 2 circular flat faces and 1 curved surface. Like a soup can.
- A **sphere** has *no* flat faces, no edges, and no vertices. It's perfectly round.


Worked Examples

① How many faces does a cube have?

 A cube has a top, bottom, and four side faces. Total: 6.

 **Answer:** 6

② A shape has 2 flat circles and 1 curved surface. What is it?

 Two flat circular faces and a curved side describes a cylinder. (Like a soup can.)

 **Answer:** *Cylinder*

③ How many vertices does a cone have?

 A cone has 1 pointed tip (the apex) and a circular base. The tip is the only vertex.

 **Answer:** 1




Practice Problems

Count faces, edges, vertices, or name the solid.

- Cube: faces = ? _____
- Cube: edges = ? _____
- Cube: vertices = ? _____
- Rectangular prism: faces = ? _____
- Cone: vertices = ? _____
- Sphere: faces = ? _____

7. Cylinder: flat faces = ? _____
8. Triangular prism: faces = ? _____
9. A ball is a _____. _____
10. A cereal box is a _____. _____
11. A party hat is a _____. _____
12. A soup can is a _____. _____

Study Tips

-  For a prism, the number of vertices is double the number of corners of its base. A triangular prism has $3 + 3 = 6$ vertices.
-  Curved surfaces don't count as "faces" the same way flat ones do. A cylinder has 2 flat faces; the curved side is separate.
-  Spheres have NONE of any: no flat faces, no edges, no vertices.

Word Problems

1. Ben stacks 3 cubes. How many total faces do the 3 cubes have (before stacking)?

Answer: _____

2. A gift box shaped like a rectangular prism has 12 edges. A soup can has 2 edges. How many more edges does the box have?

Answer: _____

Answer Key — with Friendly Explanations**Practice Problems**

1. Cube has 6 flat square faces.
 **Answer:** 6
2. 12 edges (where faces meet).
 **Answer:** 12
3. 8 vertices (corners).
 **Answer:** 8
4. Same as a cube: 6.
 **Answer:** 6
5. One vertex at the tip.
 **Answer:** 1
6. No flat faces.
 **Answer:** 0
7. Two circular flat faces.
 **Answer:** 2
8. 2 triangular ends + 3 rectangular sides = 5.
 **Answer:** 5
9. Sphere.
 **Answer:** *Sphere*
10. Rectangular prism.
 **Answer:** *Rectangular prism*
11. Cone.
 **Answer:** *Cone*
12. Cylinder.
 **Answer:** *Cylinder*

Word Problems

1. $3 \times 6 = 18$ faces.
 **Answer:** 18 faces
2. $12 - 2 = 10$ more edges.
 **Answer:** 10 more edges

Want a Complete Grade 3 Math Program?

Check Out Our Louisiana LEAP Grade 3 Math Bundle!



Louisiana LEAP Grade 3 Math Bundle

Practice tests, complete answer keys, and step-by-step explanations
Everything a third grader needs to feel ready!

Tests +
Answer Keys
One Bundle

Find it online:

<https://www.effortlessmath.com/product/louisiana-leap-grade-3-math-made-ridiculously-simple/>

Important: This bundle combines the practice and the explanations into one easy-to-print package designed for Grade 3 students. **Made for parents, teachers, and tutors who want everything in one place.**

Full Practice Tests

- ✓ Complete LEAP-style practice tests
- ✓ Mirrors the real exam format and difficulty
- ✓ Builds test-taking confidence
- ✓ Aligned with state Grade 3 math standards

Start with a full-length practice test!

Step-by-Step Answer Keys

- ✓ Every question worked out, not just an answer
- ✓ Friendly, third-grade-ready explanations
- ✓ Catches and explains common misconceptions
- ✓ Parents can help even without a math background

Learn from every mistake!

Single-Skill Worksheets

- ✓ Targets one Grade 3 math skill per page
- ✓ Covers place value, multiplication, fractions, measurement, geometry
- ✓ Includes a Quick Review + Practice + Word Problems
- ✓ Built-in friendly Answer Key for self-checking

Master one skill at a time!