

# Piecewise Functions

Name: \_\_\_\_\_

Date: \_\_\_\_\_

Score: \_\_\_\_\_ / 27

## Q Quick Review

A **piecewise function** uses different rules on different parts of the domain. First decide which interval contains the input, then use only that rule. On graphs, a closed circle means the endpoint is included; an open circle means it is not. Piecewise functions are useful for real situations with changing rules, such as shipping costs, tax brackets, parking fees, and step rates.

## PRACTICE

Evaluate each piecewise function or interpret the boundary correctly.

- $f(x) = \begin{cases} 2x + 1, & x < 0 \\ x^2, & x \geq 0 \end{cases}; f(-3)$  \_\_\_\_\_
- $f(x) = \begin{cases} 2x + 1, & x < 0 \\ x^2, & x \geq 0 \end{cases}; f(0)$  \_\_\_\_\_
- $f(x) = \begin{cases} 2x + 1, & x < 0 \\ x^2, & x \geq 0 \end{cases}; f(4)$  \_\_\_\_\_
- $g(x) = \begin{cases} x + 5, & x < 2 \\ 3x, & x \geq 2 \end{cases}; g(1)$  \_\_\_\_\_
- $g(x) = \begin{cases} x + 5, & x < 2 \\ 3x, & x \geq 2 \end{cases}; g(2)$  \_\_\_\_\_
- $g(x) = \begin{cases} x + 5, & x < 2 \\ 3x, & x \geq 2 \end{cases}; g(5)$  \_\_\_\_\_
- $h(x) = \begin{cases} -4, & x < -1 \\ 2x + 1, & -1 \leq x < 3 \\ 9, & x \geq 3 \end{cases}; h(-2)$  \_\_\_\_\_
- $h(x) = \begin{cases} -4, & x < -1 \\ 2x + 1, & -1 \leq x < 3 \\ 9, & x \geq 3 \end{cases}; h(-1)$  \_\_\_\_\_
- $h(x) = \begin{cases} -4, & x < -1 \\ 2x + 1, & -1 \leq x < 3 \\ 9, & x \geq 3 \end{cases}; h(3)$  \_\_\_\_\_
- Open point  $(4, 7)$ , closed point  $(4, 2)$ ;  $f(4)$  \_\_\_\_\_
- Open point  $(-2, 1)$ , closed point  $(-2, 5)$ ;  $f(-2)$  \_\_\_\_\_
- Graph has  $f(x) = x + 1$  for  $x < 3$ ,  $f(x) = 6$  for  $x \geq 3$ ;  $f(3)$  \_\_\_\_\_
- $S(w) = \begin{cases} 6, & 0 < w \leq 2 \\ 6 + 1.5(w - 2), & w > 2 \end{cases}; S(2)$  \_\_\_\_\_
- $S(w) = \begin{cases} 6, & 0 < w \leq 2 \\ 6 + 1.5(w - 2), & w > 2 \end{cases}; S(5)$  \_\_\_\_\_
- $A(a) = \begin{cases} 9, & a < 13 \\ 15, & 13 \leq a < 60 \\ 11, & a \geq 60 \end{cases}; A(13)$  \_\_\_\_\_
- $A(a) = \begin{cases} 9, & a < 13 \\ 15, & 13 \leq a < 60 \\ 11, & a \geq 60 \end{cases}; A(62)$  \_\_\_\_\_
- $P(n) = \begin{cases} 12n, & n < 10 \\ 10n, & n \geq 10 \end{cases}; P(9)$  \_\_\_\_\_
- $P(n) = \begin{cases} 12n, & n < 10 \\ 10n, & n \geq 10 \end{cases}; P(10)$  \_\_\_\_\_
- $C(t) = \begin{cases} 25, & 0 \leq t \leq 500 \\ 25 + 0.05(t - 500), & t > 500 \end{cases}; C(500)$  \_\_\_\_\_
- $C(t) = \begin{cases} 25, & 0 \leq t \leq 500 \\ 25 + 0.05(t - 500), & t > 500 \end{cases}; C(620)$  \_\_\_\_\_



Scan Me

◆ VISUAL PRACTICE

Use the graph, table, chart, or diagram to answer the question.

21. Use the piecewise graph. What is  $f(1)$ ?



Answer: \_\_\_\_\_

22. Use the rule  $f(x) = \begin{cases} x + 2, & x < 3 \\ 10, & x \geq 3 \end{cases}$ . Find  $f(3)$ .

$x$ value	$x < 3$	$x \geq 3$
rule	$x + 2$	10

Answer: \_\_\_\_\_

23. Use the parking fee rule. What is  $C(6)$ ?

$h$ hours	$0 < h \leq 2$	$h > 2$
$C(h)$	8	$8 + 3(h - 2)$

Answer: \_\_\_\_\_

◆ Word Problems

24. A parking garage charges \$4 for the first hour and \$2 for each additional hour. Write a piecewise cost function for  $h$  hours.

\_\_\_\_\_

25. A delivery service charges \$6 for packages up to 5 lb and \$10 for packages over 5 lb. Find the cost for 5 lb and 8 lb. \_\_\_\_\_

26. A concert ticket costs \$12 before the event day and \$18 on the event day. Write a simple piecewise model for the ticket price.

\_\_\_\_\_

27. A water bill is \$20 for up to 1000 gallons and then \$0.03 for each gallon over 1000. Write the cost for  $g$  gallons. \_\_\_\_\_



## Answer Keys

1.
2.
3.
4.
5.
6.
7.
8.
9.
10.
11.
12.
13.
14.
15.

16.
17.
18.
19.
20.
21.
22.
23.
24. 
$$C(h) = \begin{cases} 4, & 0 < h \leq 1 \\ 4 + 2(h - 1), & h > 1 \end{cases}$$
25.
26. 
$$P = \begin{cases} 12, & \text{before event day} \\ 18, & \text{event day} \end{cases}$$
27. 
$$C(g) = \begin{cases} 20, & 0 \leq g \leq 1000 \\ 20 + 0.03(g - 1000), & g > 1000 \end{cases}$$


### Step-by-Step Tutor Notes

1. Start with the definition the problem is testing, then apply it directly. Since  $-3 < 0$ , use  $2x + 1$ . Then  $2(-3) + 1 = -5$ . So the answer is  $-5$ .
2. Use the clue in the question first, then let the arithmetic finish the job. The boundary  $0$  is included in  $x \geq 0$ , so use  $x^2$  and get  $0$ . So the answer is  $0$ .
3. This is a good place to slow down, check the notation, and simplify cleanly. Because  $4 \geq 0$ , use  $x^2$ . Then  $4^2 = 16$ . So the answer is  $16$ .
4. Use the clue in the question first, then let the arithmetic finish the job. Since  $1 < 2$ , use  $x + 5$ . That gives  $1 + 5 = 6$ . So the answer is  $6$ .
5. Start with the definition the problem is testing, then apply it directly. The value  $2$  belongs to  $x \geq 2$ , so use  $3x$ :  $3(2) = 6$ . So the answer is  $6$ .
6. Take it one clear step at a time and keep the original question in mind. Since  $5 \geq 2$ , use the second rule. Then  $3(5) = 15$ . So the answer is  $15$ .
7. Start with the definition the problem is testing, then apply it directly. The input  $-2$  is less than  $-1$ , so use the first rule. So the answer is  $-4$ .
8. Use the clue in the question first, then let the arithmetic finish the job. The input  $-1$  is included in the middle interval, so  $2(-1) + 1 = -1$ . So the answer is  $-1$ .
9. Start with the definition the problem is testing, then apply it directly. The middle interval stops before  $3$ , so  $x = 3$  uses the last rule. So the answer is  $9$ .
10. At one  $x$ -value, the closed point gives the function value. The open point is not included.
11. Focus on the main idea of the problem, then simplify carefully. The closed point at  $x = -2$  is the one the graph actually includes. So the answer is  $5$ .
12. Focus on the main idea of the problem, then simplify carefully. Because the second rule includes  $x = 3$ , use the constant value  $6$ . So the answer is  $6$ .
13. Use the clue in the question first, then let the arithmetic finish the job. The first shipping bracket includes  $2$  lb, so the cost is  $6$ . So the answer is  $6$ .
14. Use the clue in the question first, then let the arithmetic finish the job. Five pounds is over  $2$ , so use  $6 + 1.5(5 - 2) = 10.5$ . So the answer is  $10.5$ .
15. Take it one clear step at a time and keep the original question in mind. Age  $13$  is included in the middle bracket, so the price is  $15$ . So the answer is  $15$ .
16. This is a good place to slow down, check the notation, and simplify cleanly. Since  $62 \geq 60$ , use the senior-price bracket. So the answer is  $11$ .
17. Take it one clear step at a time and keep the original question in mind. Nine shirts is below the discount threshold, so  $12(9) = 108$ . So the answer is  $108$ .
18. Start with the definition the problem is testing, then apply it directly. Ten shirts qualifies for the lower unit price, so  $10(10) = 100$ . So the answer is  $100$ .
19. Focus on the main idea of the problem, then simplify carefully. The base plan includes  $500$  texts, so the cost is still  $25$ . So the answer is  $25$ .
20. There are  $120$  extra texts, and  $0.05(120) = 6$ . Add that to  $25$  to get  $31$ .
21. At  $x = 1$ , the closed point is at  $y = 1$ . The open point is not included.
22. This is a good place to slow down, check the notation, and simplify cleanly. Because  $3$  is included in  $x \geq 3$ , use the second rule. So the answer is  $10$ .
23. Take it one clear step at a time and keep the original question in mind. Since  $6 > 2$ , use  $8 + 3(h - 2)$ . Then  $8 + 3(6 - 2) = 20$ . So the answer is  $20$ .
24. The first rule handles the first hour. After  $1$  hour, add  $\$2$  for each extra hour.
25. The  $5$ -lb package is included in the first rule, while  $8$  lb is over  $5$  lb and uses the second rule.
26. The price depends on which time category applies, so a two-rule piecewise model fits the situation.
27. The flat fee covers the first  $1000$  gallons. After that, only the extra gallons are charged at  $\$0.03$  each.



Scan Me

## Want a Full Algebra 1 Textbook? Try Our California CAASPP Made Simple Book!



### California CAASPP Algebra I Made Ridiculously Simple

The friendly, step-by-step Algebra 1 textbook  
Plain-English explanations, guided practice, and review support.



Scan Me

Full Lessons Inside

Concepts  
Practice  
Mastery

**Important:** All our test books contain **unique, completely different tests** from each other! Each book offers fresh practice questions—no repeats!

#### 5 Practice Tests

- ✓ 5 complete practice tests with detailed explanations
- ✓ Perfect foundation for CAASPP test preparation
- ✓ Builds confidence and test-taking skills
- ✓ High-quality questions aligned with state standards

Start your practice journey!

#### 6 Practice Tests

- ✓ 6 complete practice tests with detailed explanations
- ✓ **Unique tests**—different from the 5 tests book
- ✓ Perfect for more practice after mastering 5 tests
- ✓ Builds even more confidence and test-taking skills
- ✓ Same high-quality questions aligned with standards


Take your practice to the next level!

#### 7 Practice Tests

- ✓ 7 complete practice tests for maximum preparation
- ✓ **Unique tests**—different from 5 and 6 tests books
- ✓ The most comprehensive practice for Algebra 1
- ✓ Ideal for students aiming for top scores
- ✓ Extensive practice builds mastery and confidence

Go all the way with comprehensive practice!

☐ STUDENT FAVORITE • Master Algebra I From the Ground Up ☐



### Algebra I for Beginners

Written by a top math teacher & aligned with national and state Algebra I courses. From linear equations to graphing quadratics — explained the easy way.

- ✓ **Complete coverage** of every Algebra I concept — perfect companion to these worksheets
- ✓ **Step-by-step explanations** with worked examples on every topic
- ✓ **QR codes in every chapter** for free video lessons & bonus practice
- ✓ **2 full-length practice tests** with detailed answer keys

- ✓ 100% Guaranteed
- ✓ Lifetime Support
- ✓ Trusted by Teachers

Start Your Algebra Journey Today! →

★ STUDENT'S #1 CHOICE ★

Teacher-recommended • 12,000+ Happy Students


↓ PDF EDITION



Scan Me

Instant download • any device

☐ PAPERBACK



Scan Me

Paperback on Amazon

Hold it in your hands

Pair these free worksheets with *Algebra I for Beginners* and you have a complete self-paced course — concept lessons, daily practice, and full exam-style reviews, all in one path. →

[EffortlessMath.com/product/algebra-i-for-beginners](https://EffortlessMath.com/product/algebra-i-for-beginners)