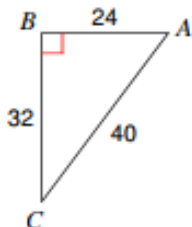
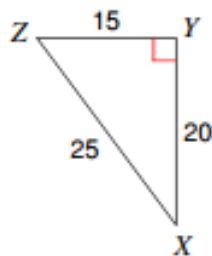


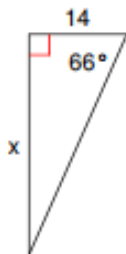
## Missing Sides and Angles of a Right Triangle

 Find the value of each trigonometric ratio as fractions in their simplest form.

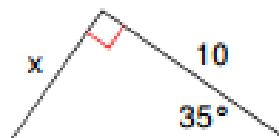
 1)  $\tan A$ 

 2)  $\sin x$ 


 Find the missing sides. Round answers to the nearest tenth.

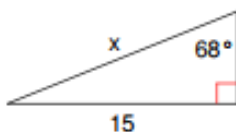
3)



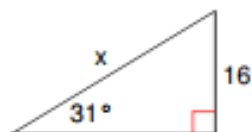
4)



5)



6)



**Answers*****Missing Sides and Angles of a Right Triangle***

1)  $\frac{4}{3}$

2)  $\frac{3}{5}$

3) 31.4

4) 7.0

5) 16.2

6) 31.1