



Square

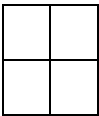
1. How many sides and corners a square has?

_____ sides

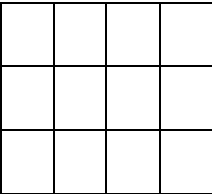
_____ corner

Write the number of squares each shape has.

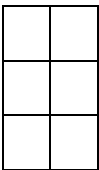
2.



3.



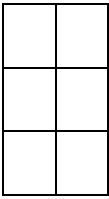
4.



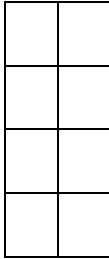


Count the squares and add together.

5.

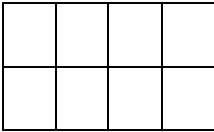


+




$$\underline{\quad} + \underline{\quad} = \underline{\quad}$$

6.

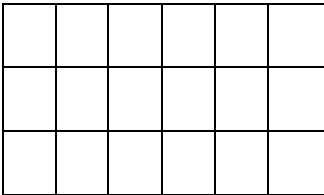


+

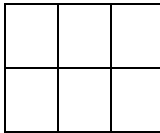


$$\underline{\quad} + \underline{\quad} = \underline{\quad}$$

7.

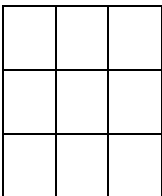


+

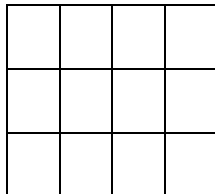


$$\underline{\quad} + \underline{\quad} = \underline{\quad}$$

8.



+



$$\underline{\quad} + \underline{\quad} = \underline{\quad}$$