

Quadrilaterals and Rectangles

 Write the name of quadrilaterals.

1)



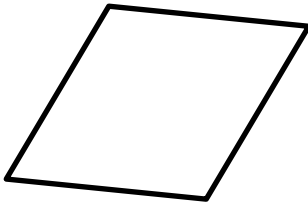
2)



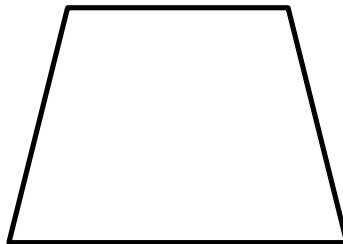
3)



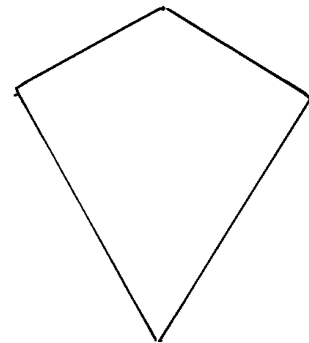
4)



5)



6)



 Solve.

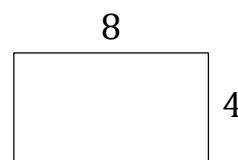
7) A rectangle has _____ sides and _____ angles.

8) Draw a rectangle that is 6 centimeters long and 3 centimeters wide. What is the perimeter?

9) Draw a rectangle 5 cm long and 2 cm wide.

10) Draw a rectangle whose length is 4 cm and whose width is 2 cm. What is the perimeter of the rectangle?

11) What is the perimeter of the rectangle?





Answers

- | | |
|------------------|-------------------------------------|
| 1) Square | 7) $4 - 4$ |
| 2) Rectangle | 8) 18 |
| 3) Parallelogram | 9) Use a rule to draw the rectangle |
| 4) Rhombus | 10) 12 |
| 5) Trapezoid | 11) 24 |
| 6) Diamond | |