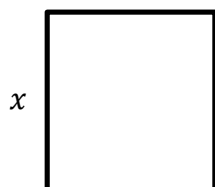


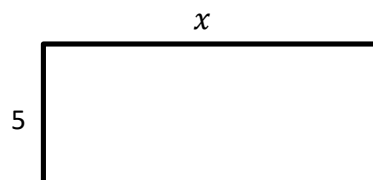
Perimeter: Find the Missing Side Lengths

 Find the missing side of each shape.

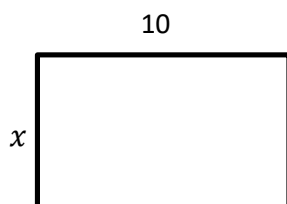
1) perimeter = 44



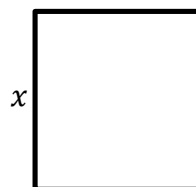
2) perimeter = 28



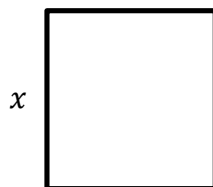
3) perimeter = 30



4) perimeter = 16



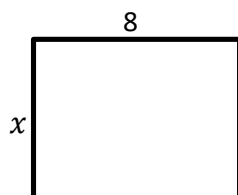
5) perimeter = 60



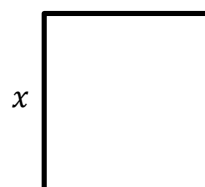
6) perimeter = 22



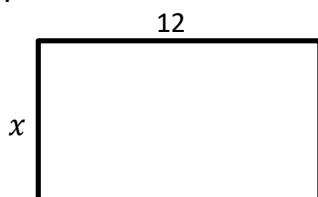
7) perimeter = 30



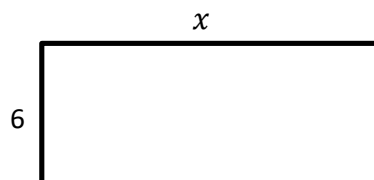
8) perimeter = 36



9) perimeter = 50



10) perimeter = 48





Answers

- 1) 11
- 2) 9
- 3) 5
- 4) 4
- 5) 15
- 6) 4
- 7) 7
- 8) 9
- 9) 13
- 10) 18