








Numbers & Animal

1. Which animal is first? _____
2. Which animal is third? _____
3. Which animal is fifth? _____
4. Which animal is second? _____
5. Which animal is fourth? _____

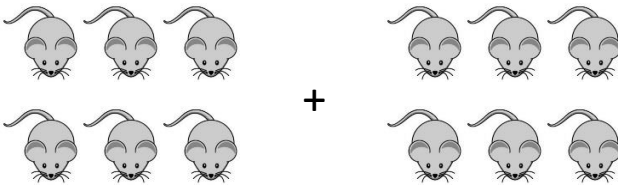
6. How many rabbits are there? _____
7. How many mice are there? _____



8. How many giraffes are there? _____


Complete following additions using the shapes.

9.



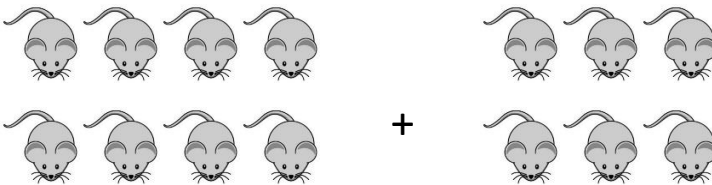
$$\underline{\quad} + \underline{\quad} = \underline{\quad}$$

10.



$$\underline{\quad} + \underline{\quad} = \underline{\quad}$$

11.



$$\underline{\quad} + \underline{\quad} = \underline{\quad}$$