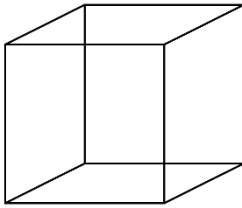


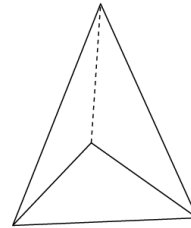
**Identify Three-Dimensional Figures**

 Write the name of each shape.

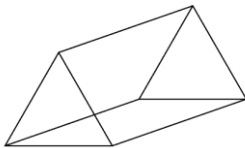
1)



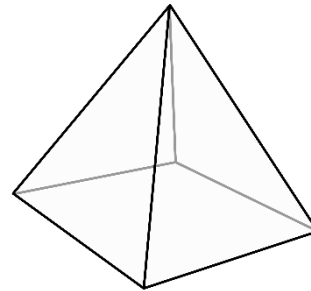
2)




3)



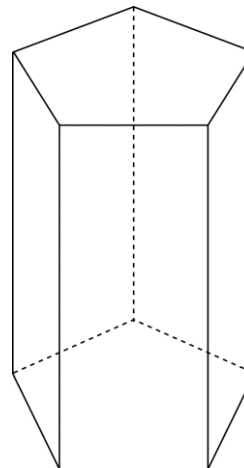
4)



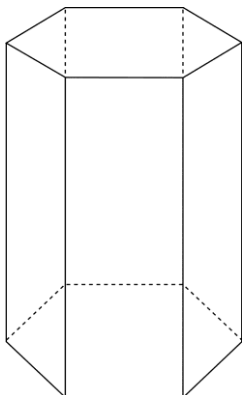
5)



6)



7)





## Answers

- 1) Cube
- 2) Triangular pyramid
- 3) Triangular prism
- 4) Square pyramid
- 5) Rectangular prism
- 6) Pentagonal prism
- 7) Hexagonal prism