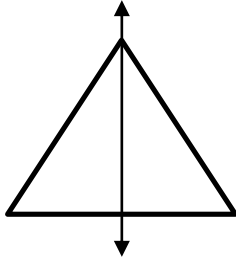


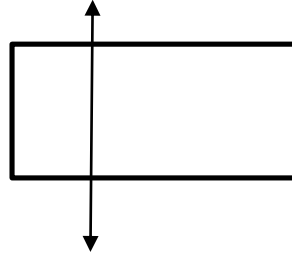
Identify Lines of Symmetry

 *Tell whether the line on each shape is a line of symmetry.*

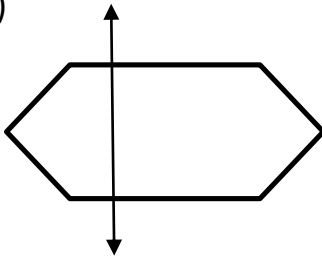
1)



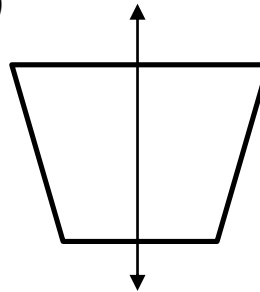
2)




3)




4)



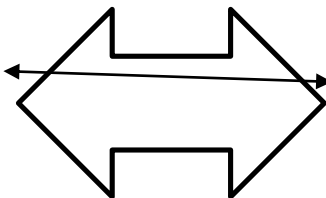
5)




6)



7)



8)





Answers

- 1) yes
- 2) no
- 3) no
- 4) yes
- 5) yes
- 6) yes
- 7) no
- 8) yes