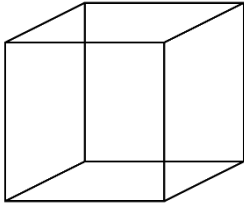


Identify Faces of Three-Dimensional Figures

 Write the number of faces.

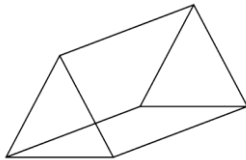
1)



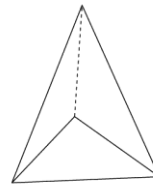
2)




3)



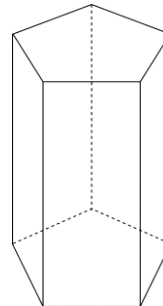
4)



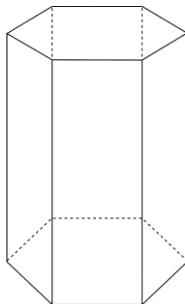
5)



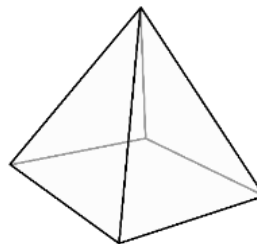
6)



7)



8)





Answers

- 1) 6
- 2) 2
- 3) 5
- 4) 4
- 5) 6
- 6) 7
- 7) 8
- 8) 5