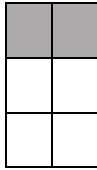




Fraction

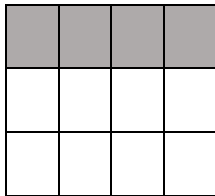
What fraction of each shape is shaded?

1.



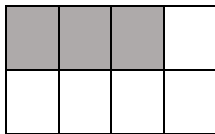
$$\frac{2}{6}$$

2.



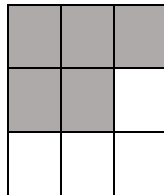
—

3.




—

4.




—

5.



—

6.



—



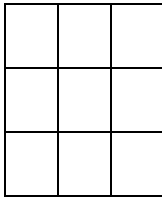
Read each fraction and color in that part of the shape.



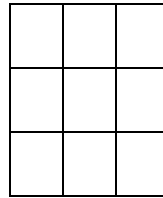
$$\frac{2}{4}$$



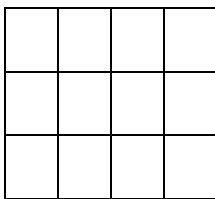
$$\frac{3}{4}$$




$$\frac{4}{9}$$



$$\frac{7}{9}$$



$$\frac{9}{12}$$



$$\frac{5}{12}$$