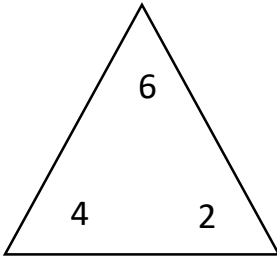




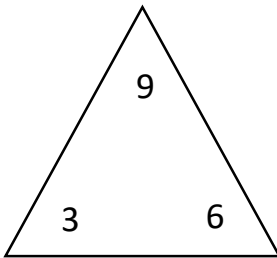
Fact Family

1.



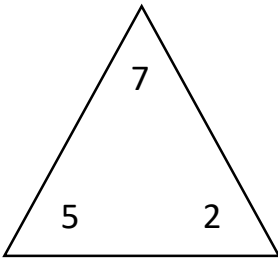
$$4 + 2 = 6$$

1.



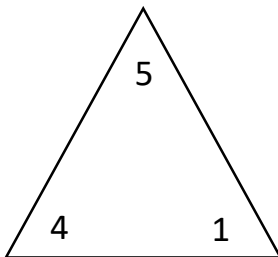
$$\underline{\quad} + \underline{\quad} = \underline{\quad}$$

2.



$$\underline{\quad} + \underline{\quad} = \underline{\quad}$$

3.



$$\underline{\quad} + \underline{\quad} = \underline{\quad}$$



4. The numbers 21, 19, and 40 form a fact family. Write two addition facts.

$$\underline{\quad} + \underline{\quad} = \underline{\quad}$$

$$\underline{\quad} + \underline{\quad} = \underline{\quad}$$

5. The numbers 15, 20, and 35 form a fact family. Write two addition facts.

$$\underline{\quad} + \underline{\quad} = \underline{\quad}$$

$$\underline{\quad} + \underline{\quad} = \underline{\quad}$$

6. The numbers 20, 30, and 50 form a fact family. Write two addition facts.

$$\underline{\quad} + \underline{\quad} = \underline{\quad}$$

$$\underline{\quad} + \underline{\quad} = \underline{\quad}$$

7. The numbers 15, 5, and 20 form a fact family. Write two addition facts.

$$\underline{\quad} + \underline{\quad} = \underline{\quad}$$

$$\underline{\quad} + \underline{\quad} = \underline{\quad}$$