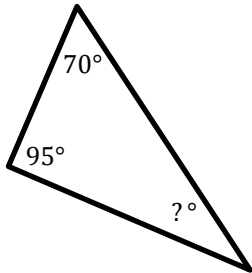


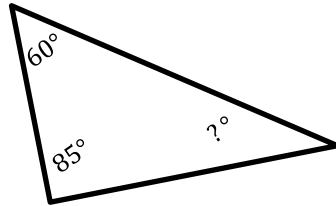
## Triangles

 Find the measure of the unknown angle in each triangle.

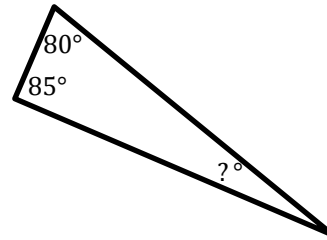
1)



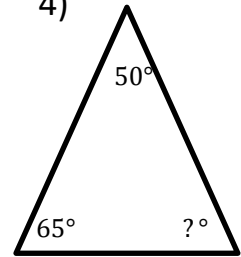
2)



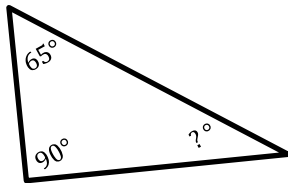
3)



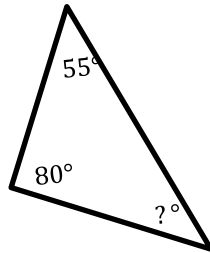
4)



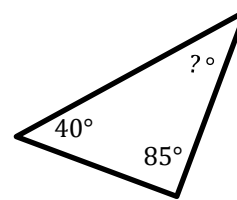
5)



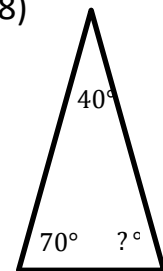
6)



7)

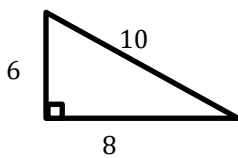


8)

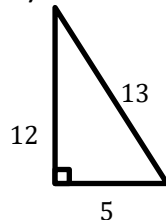


 Find area of each triangle.

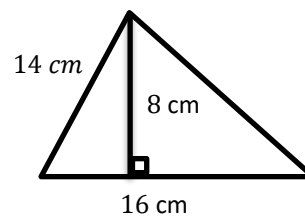
9)



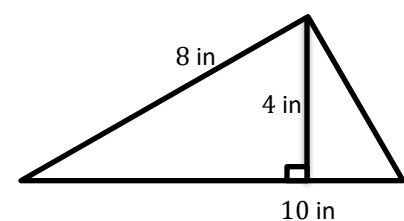
10)



11)



12)


<https://bit.ly/3opIC>


**Answers*****Triangles***

- 1)  $15^\circ$
- 2)  $35^\circ$
- 3)  $15^\circ$
- 4)  $65^\circ$

- 5)  $25^\circ$
- 6)  $45^\circ$
- 7)  $55^\circ$
- 8)  $70^\circ$

- 9) 24 square unites
- 10) 30 square unites
- 11) 64 square unites
- 12) 20 square unites

