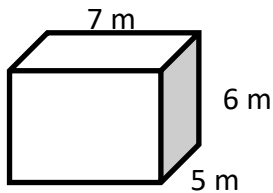


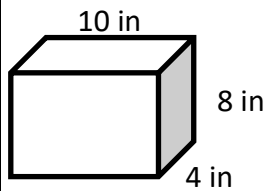
## Rectangular Prism

 Find the volume of each Rectangular Prism.

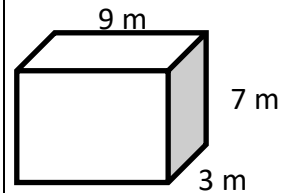
1)



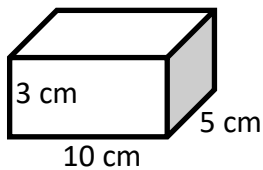
2)



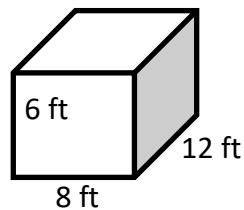
3)



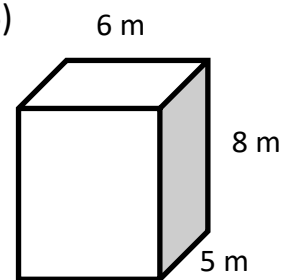
4)



5)

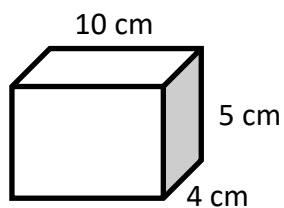


6)

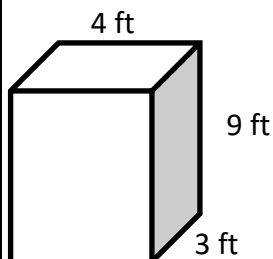


 Find the surface area of each Rectangular Prism.

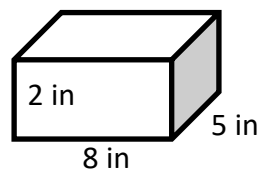
7)



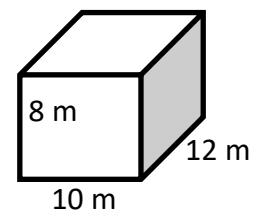
8)



9)



10)





## Answers

### ***Rectangular Prism***

1)  $210 m^3$

2)  $320 in^3$

3)  $189 m^3$

4)  $150 cm^3$

5)  $576 ft^3$

6)  $240 m^3$

7)  $220 cm^2$

8)  $150 ft^2$

9)  $132 in^2$

10)  $592 m^2$