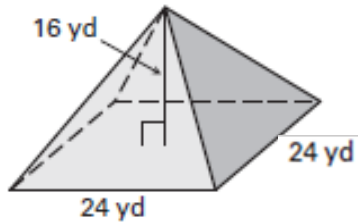


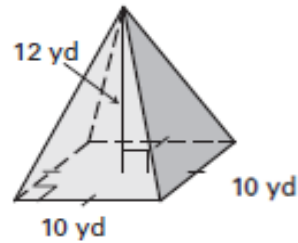
Pyramids and Cone

 Find the volume of each Pyramid and Cone. ($\pi = 3.14$)

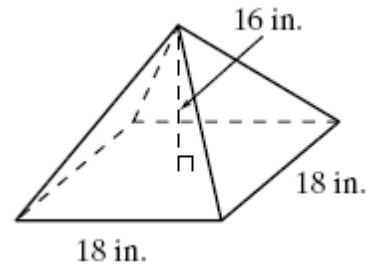
1)



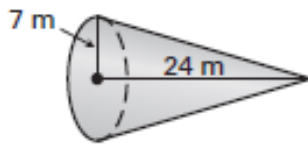
2)



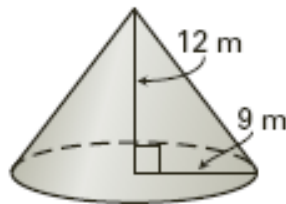
3)



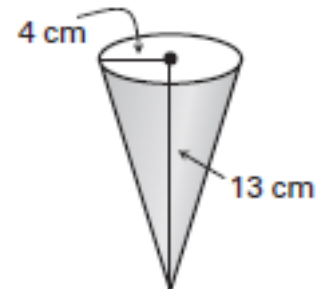
4)



5)

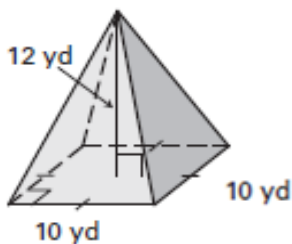


6)

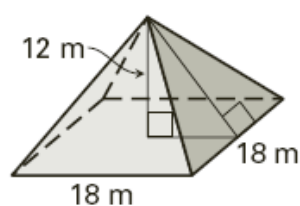


 Find the surface area of each Pyramid and Cone. ($\pi = 3.14$)

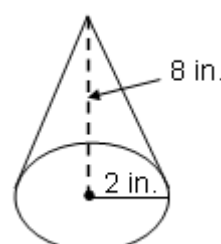
7)



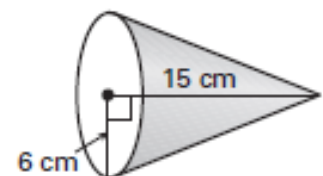
8)



9)



10)





Answers

Pyramids and Cone

1) $3,072 \text{ yd}^3$

2) 400 yd^3

3) $1,728 \text{ in}^3$

4) $1,230.9 \text{ m}^3$

5) $1,017.9 \text{ m}^3$

6) 217.7 cm^3

7) 360 yd^2

8) 864 m^2

9) 64.34 in^2

10) 417.4 cm^2