
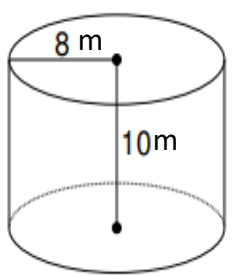
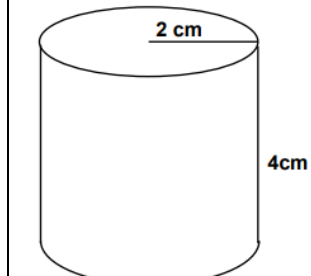
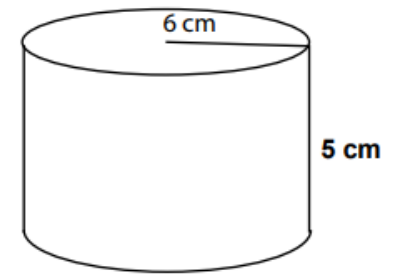
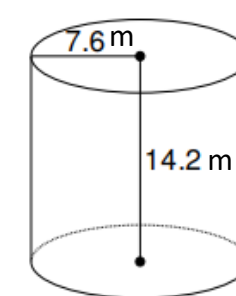
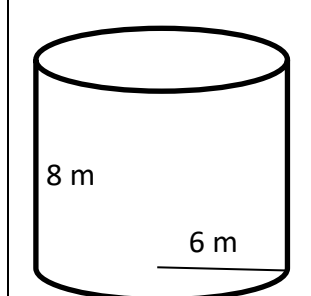
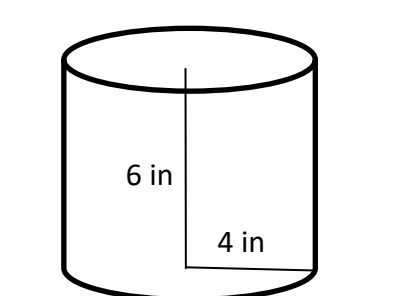
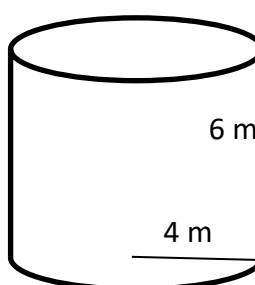
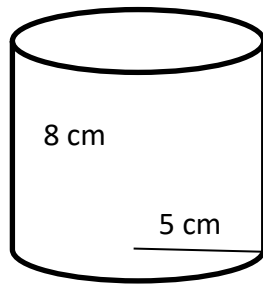
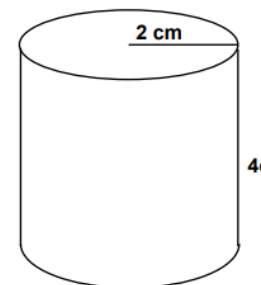
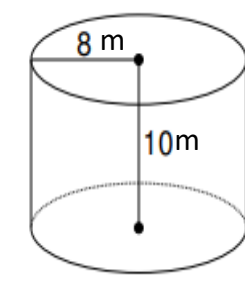


Cylinder

 Find the volume of each Cylinder. Round your answer to the nearest tenth. ($\pi = 3.14$)

1) 	2) 	3) 
4) 	5) 	6) 

 Find the surface area of each Cylinder. ($\pi = 3.14$)

7) 	8) 	9) 	10) 
---	---	--	--



Answers***Cylinder***

- 1) $2,009.6 m^3$
- 2) $50.24 cm^3$
- 3) $565.2 cm^3$
- 4) $2,575.4 m^3$

- 5) $904.3 m^3$
- 6) $301.4 in^3$
- 7) $251.2 m^2$
- 8) $408.2 cm^2$

- 9) $75.4 cm^2$
- 10) $904.3 m^2$

